


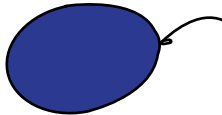
Name : \_\_\_\_\_

# Heavy vs Light

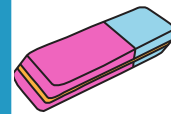
1) Circle the heaviest object.




2) Circle the lightest



3) Circle the heaviest



4) Circle the lightest object.



**PREVIEW**

Gain complete access to the largest collection of worksheets in all subjects!


Members, please log in to download this worksheet.

Not a member? Please sign up to gain complete access.

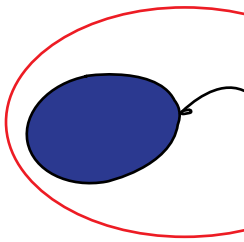
[www.mathworksheets4kids.com](http://www.mathworksheets4kids.com)

# Heavy vs Light

1) Circle the heaviest object.



2) Circle the lightest



## PREVIEW

Gain complete access to the largest collection of worksheets in all subjects!

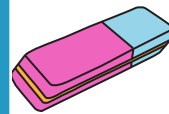
Members, please log in to download this worksheet.

Not a member? Please sign up to gain complete access.

[www.mathworksheets4kids.com](http://www.mathworksheets4kids.com)



3) Circle the heaviest



4) Circle the lightest object.

