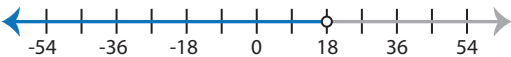
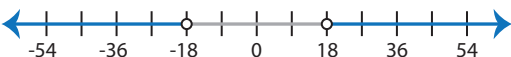
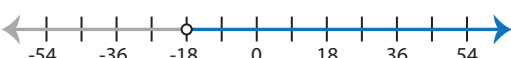



# Identifying Graphs

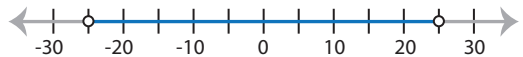
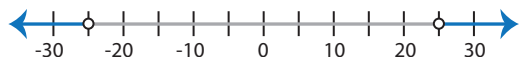
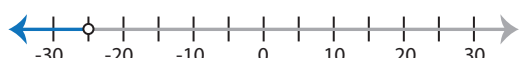
Basic: S3

Choose the correct graph that best describes the solution for each inequality.


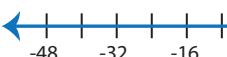
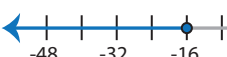
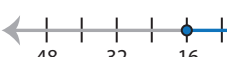
1)  $|x| < 18$

- a) 
- b) 
- c) 
- d) 

2)  $-|x| > 25$

- a) 
- b) 
- c) 
- d) No solution

3)  $|x| \leq 16$

- a) 
- b) 
- c) 
- d) 

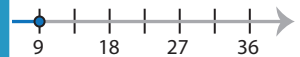
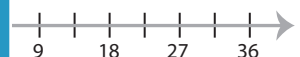
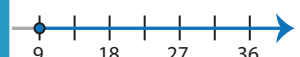
# PREVIEW

Gain complete access to the largest collection of worksheets in all subjects!


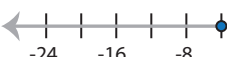
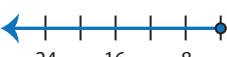
Members, please  
log in to  
download this  
worksheet.

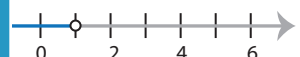



Not a member?  
Please sign up to  
gain complete  
access.

[www.mathworksheets4kids.com](http://www.mathworksheets4kids.com)

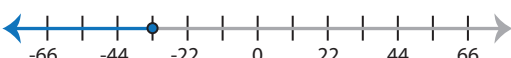
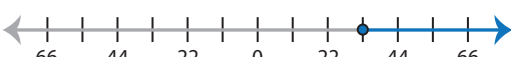
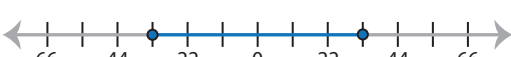

- 
- 
- 

5)  $|-x| \leq 4$


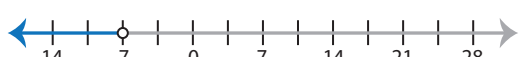

- a) 
- b) 
- c) 
- d) No solution

- 
- 
- 
- 

7)  $|-x| \geq 33$

- a) 
- b) 
- c) 
- d) 

8)  $|x| < -7$

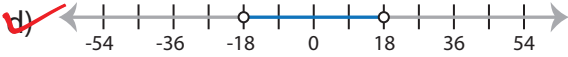
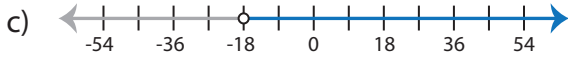
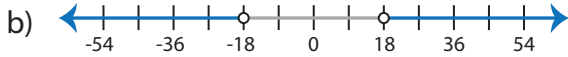
- a) 
- b) 
- c) 
- d) No solution

**Identifying Graphs**

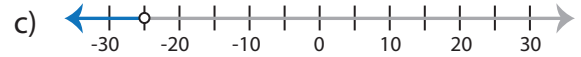
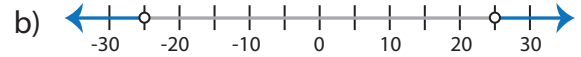
Basic: S3

Choose the correct graph that best describes the solution for each inequality.

1)  $|x| < 18$

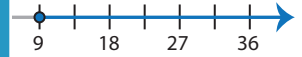
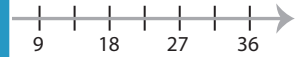
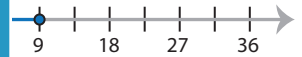
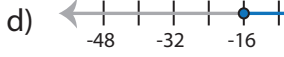
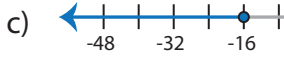
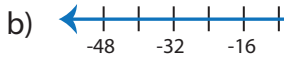
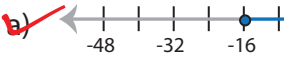


2)  $-|x| > 25$



d) No solution

3)  $|x| \leq 16$



**PREVIEW**

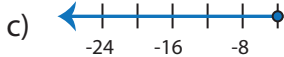
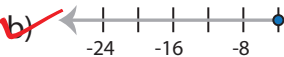
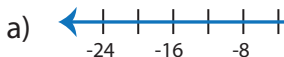
Gain complete access to the largest collection of worksheets in all subjects!

Members, please log in to download this worksheet.

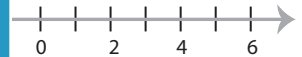
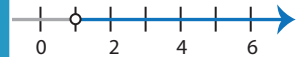
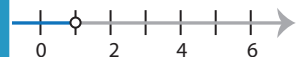
Not a member? Please sign up to gain complete access.

[www.mathworksheets4kids.com](http://www.mathworksheets4kids.com)

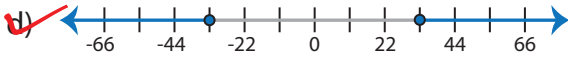
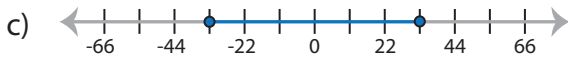
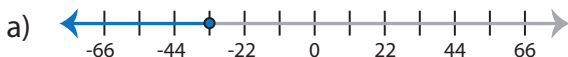
5)  $|-x| \leq 4$



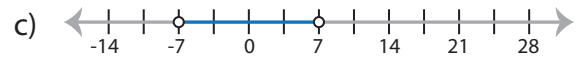
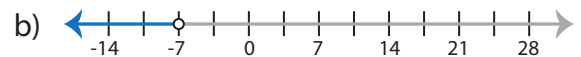
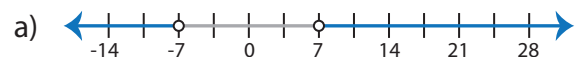
d) No solution



7)  $|-x| \geq 33$



8)  $|x| < -7$



d) No solution