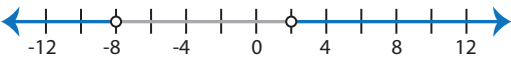

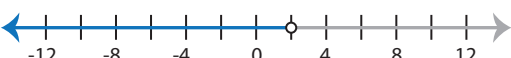
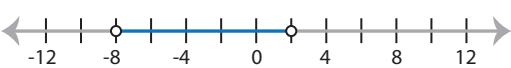


Identifying Graphs





Two-step: S1

Choose the correct graph that best describes the solution for each inequality.

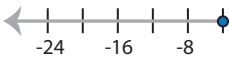


1) $|3x + 9| < 15$

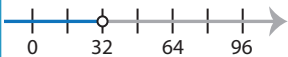
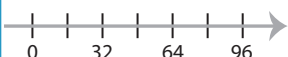
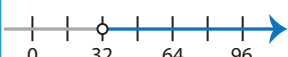
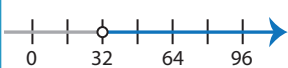
- a) 
- b) 
- c) 
- d) 

2) $\frac{|x - 6|}{4} \geq 3$

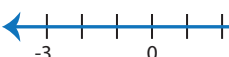


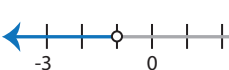
- a) 
- b) 
- c) 
- d) 



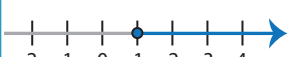
3) $|x - 2| - 5 \leq 1$

- a) 
- b) 
- c) 
- d) No solution

- a) 
- b) 
- c) 
- d) 

5) $|2x - 3| < 5$

- a) 
- b) 
- c) 
- d) 

- a) 
- b) 
- c) 

PREVIEW

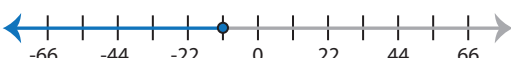
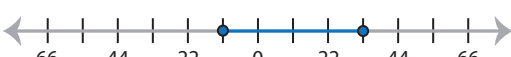
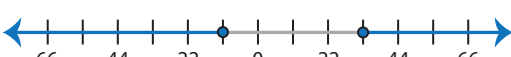
Gain complete access to the largest collection of worksheets in all subjects!

Members, please log in to download this worksheet.


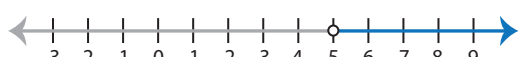


Not a member? Please sign up to gain complete access.

www.mathworksheets4kids.com

7) $14 + |x - 11| \leq 36$

- a) 
- b) 
- c) 
- d) No solution

8) $|8x - 16| > 24$

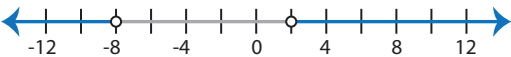

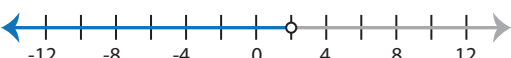
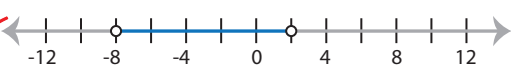
- a) 
- b) 
- c) 
- d) 

Identifying Graphs

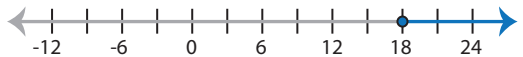


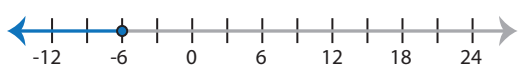
Two-step: S1

Choose the correct graph that best describes the solution for each inequality.

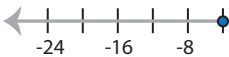


1) $|3x + 9| < 15$

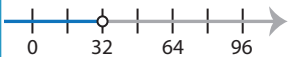
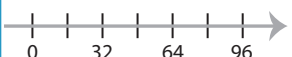

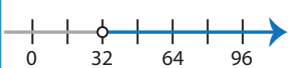
- a) 
- b) 
- c) 
- d) 

2) $\frac{|x - 6|}{4} \geq 3$

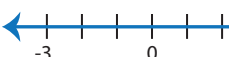


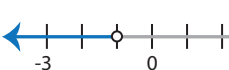
- a) 
- b) 
- c) 
- d) 




3) $|x - 2| - 5 \leq 1$

- a) 
- b) 
- c) 
- d) No solution

- a) 
- b) 
- c) 
- d) 

5) $|2x - 3| < 5$

- a) 
- b) 
- c) 
- d) 

- a) 
- b) 
- c) 

PREVIEW

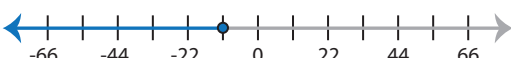
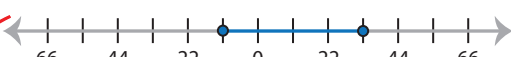
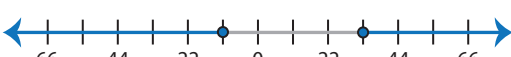
Gain complete access to the largest collection of worksheets in all subjects!

Members, please log in to download this worksheet.

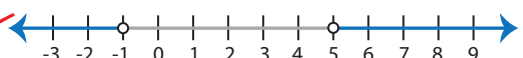
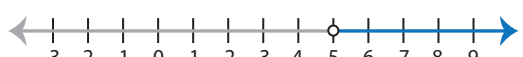

Not a member? Please sign up to gain complete access.

www.mathworksheets4kids.com

7) $14 + |x - 11| \leq 36$

- a) 
- b) 
- c) 
- d) No solution

8) $|8x - 16| > 24$

- a) 
- b) 
- c) 
- d) 