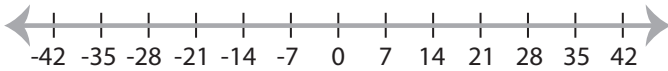


Solving & Graphing Inequalities

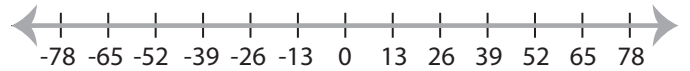
Basic: S3

Solve each problem and graph the solutions.

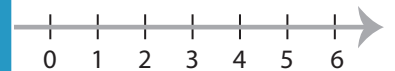
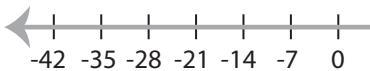
1) $|x| \leq 21$



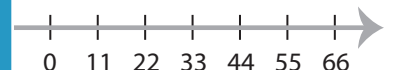
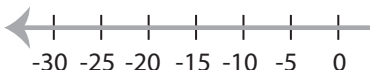
2) $|x| < -13$



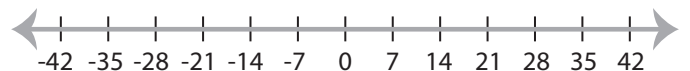
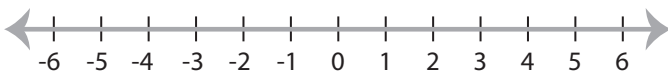
3) $|x| \geq 28$



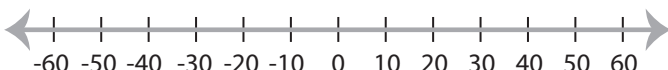
5) $|x| < 25$



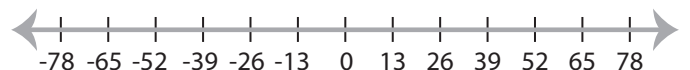
7) $-|x| > 3$



9) $|x| \geq 30$



10) $|x| < 26$



PREVIEW

Gain complete access to the largest
collection of worksheets in all subjects!

Members, please
log in to
download this
worksheet.

Not a member?
Please sign up to
gain complete
access.

www.mathworksheets4kids.com

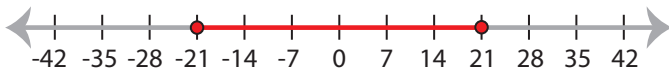
Solving & Graphing Inequalities

Basic: S3

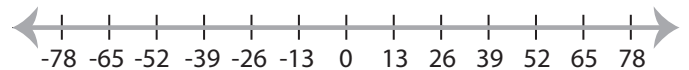
Solve each problem and graph the solutions.

1) $|x| \leq 21$

$-21 \leq x \leq 21$

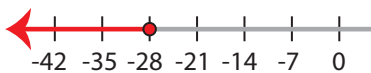


2) $|x| < -13$

No solution

3) $|x| \geq 28$

$x \leq -28$ or $x \geq 28$

**PREVIEW**

Gain complete access to the largest collection of worksheets in all subjects!

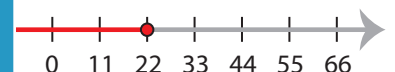
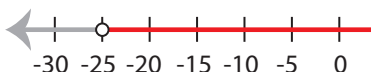
Members, please log in to download this worksheet.

Not a member? Please sign up to gain complete access.

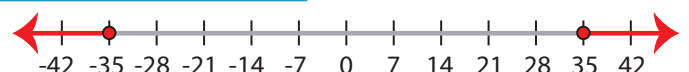
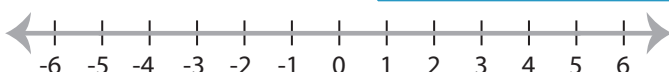
www.mathworksheets4kids.com

5) $|x| < 25$

$-25 < x < 25$

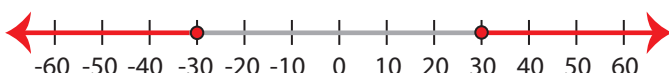


7) $-|x| > 3$

No solution**35**

9) $|x| \geq 30$

$x \leq -30$ or $x \geq 30$



10) $|x| < 26$

$-26 < x < 26$

