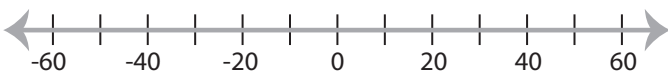


Solving & Graphing Inequalities

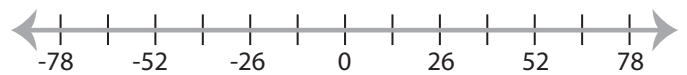
One-step: S3

Solve each problem and graph the solutions.

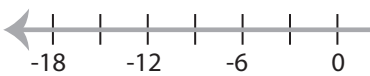
1) $\frac{|x|}{5} \leq 6$



2) $|x| + 14 \geq 27$



3) $11|x| < 66$



PREVIEW

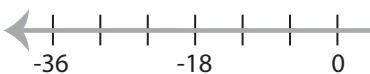
Gain complete access to the largest
collection of worksheets in all subjects!



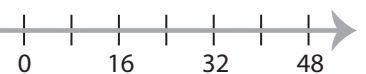
Members, please
log in to
download this
worksheet.

Not a member?
Please sign up to
gain complete
access.

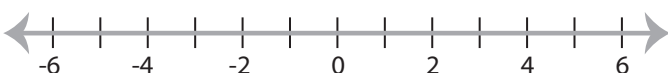
5) $-|x + 12| \geq 18$



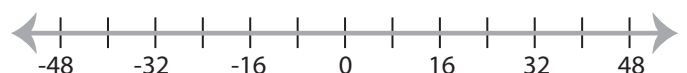
www.mathworksheets4kids.com



7) $|16x| < 32$



8) $\frac{|x|}{12} > 2$



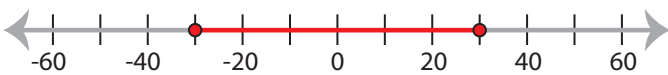
Solving & Graphing Inequalities

One-step: S3

Solve each problem and graph the solutions.

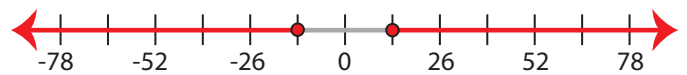
1) $\frac{|x|}{5} \leq 6$

$$-30 \leq x \leq 30$$



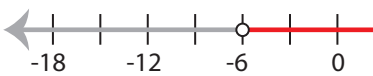
2) $|x| + 14 \geq 27$

$$x \leq -13 \text{ or } x \geq 13$$



3) $11|x| < 66$

$$-6 < x < 6$$



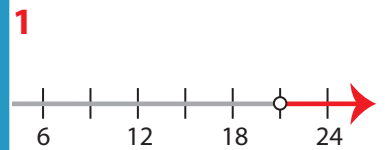
PREVIEW

Gain complete access to the largest
collection of worksheets in all subjects!

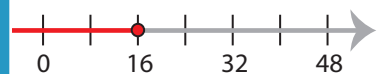
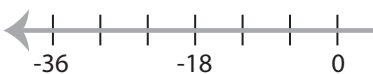
Members, please
log in to
download this
worksheet.

Not a member?
Please sign up to
gain complete
access.

www.mathworksheets4kids.com

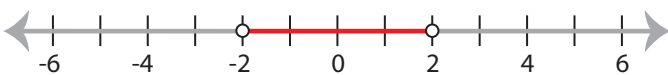


5) $-|x + 12| \geq 18$

No solution

7) $|16x| < 32$

$$-2 < x < 2$$



8) $\frac{|x|}{12} > 2$

$$x < -24 \text{ or } x > 24$$

