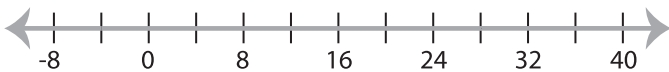


Solving & Graphing Inequalities

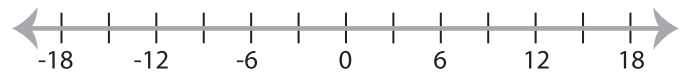
Two-step: S2

Solve each problem and graph the solutions.

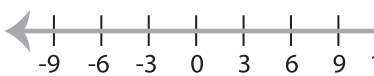
1) $-1 \leq \frac{x-4}{8} \leq 3$



2) $-15 \geq 6x + 21$ or $\frac{x}{2} - 1 < 5$



3) $\frac{x-1}{10} \geq 2$ or $-5x + 9 < 4$



PREVIEW

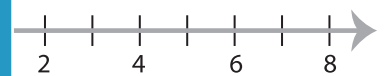
Gain complete access to the largest
collection of worksheets in all subjects!

Members, please
log in to
download this
worksheet.

Not a member?
Please sign up to
gain complete
access.

www.mathworksheets4kids.com

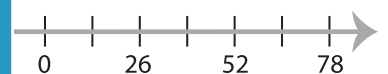
d $3x - 7 \leq 14$



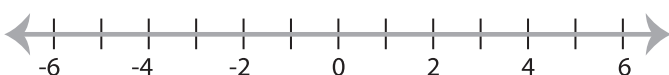
5) $-21 < 4x + 19$ and $3x - 7 < 14$



$-4 > \frac{x-2}{7}$



7) $8 \leq 3x - 4 < 11$



8) $12x - 7 \leq 5$ or $13 \leq 6x - 17$

