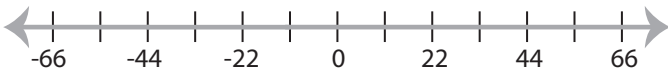


## Solving & Graphing Inequalities

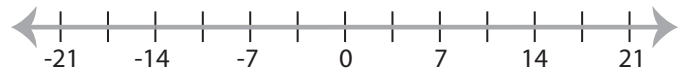
Two-step: S3

Solve each problem and graph the solutions.

1)  $\frac{x-8}{13} > -4$  and  $3x + 4 < -29$



2)  $-2x - 17 > 11$  or  $19 \leq 5x - 16$



3)  $7x + 15 < -6$  or  $-1 > 2x - 3$



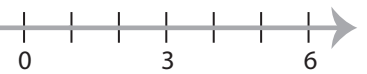
# PREVIEW

Gain complete access to the largest  
collection of worksheets in all subjects!

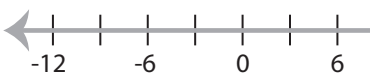
Members, please  
log in to  
download this  
worksheet.

Not a member?  
Please sign up to  
gain complete  
access.

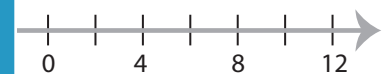
[www.mathworksheets4kids.com](http://www.mathworksheets4kids.com)



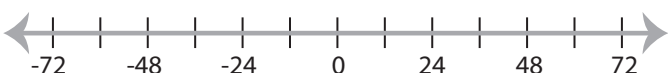
5)  $4 > \frac{x+2}{5}$  and  $-3x > 12$



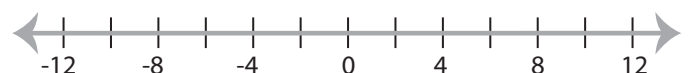
6)  $2 \leq \frac{x-10}{9}$



7)  $-2 < 1 + \frac{x}{4} \leq 7$



8)  $5x + 14 < -6$  and  $4x - 7 \leq 9$



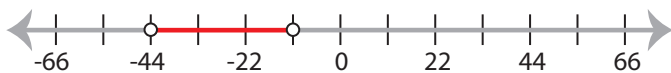
## Solving & Graphing Inequalities

Two-step: S3

Solve each problem and graph the solutions.

1)  $\frac{x-8}{13} > -4$  and  $3x + 4 < -29$

$$-44 < x < -11$$



2)  $-2x - 17 > 11$  or  $19 \leq 5x - 16$

$$x < -14 \text{ or } x \geq 7$$



3)  $7x + 15 < -6$  or  $-1 \leq x$

$$x \leq 1$$



# PREVIEW

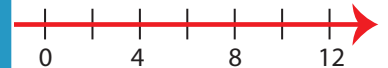
Gain complete access to the largest  
collection of worksheets in all subjects!

Members, please  
log in to  
download this  
worksheet.

Not a member?  
Please sign up to  
gain complete  
access.

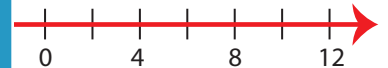
www.mathworksheets4kids.com

$$2 \leq \frac{x-10}{9}$$



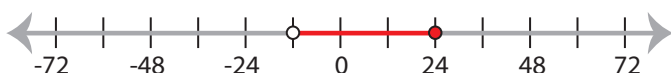
5)  $4 > \frac{x+2}{5}$  and  $-3x < -9$

$$-9 \leq x < 18$$



7)  $-2 < 1 + \frac{x}{4} \leq 7$

$$-12 < x \leq 24$$



8)  $5x + 14 < -6$  and  $4x - 7 \leq 9$

$$x < -4$$

