

Name : _____

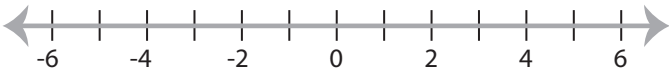
Score : _____

Graphing Inequalities

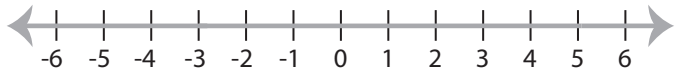
ES1

Graph the inequality :

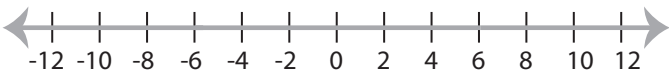
1) $x \geq -2$



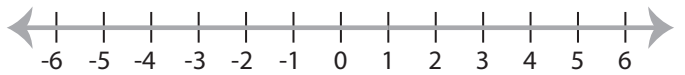
2) $x < 5$



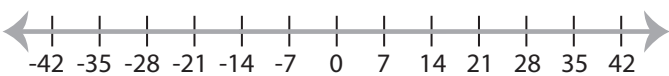
3) $x \leq 6$



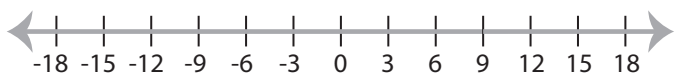
4) $x > 1$



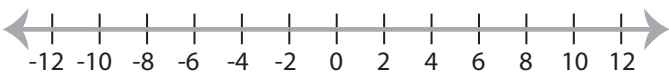
5) $x < -14$



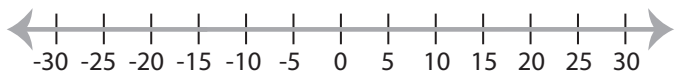
6) $x \leq 9$



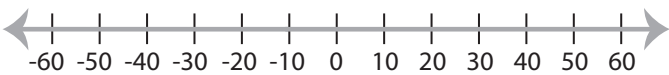
7) $x > -2$



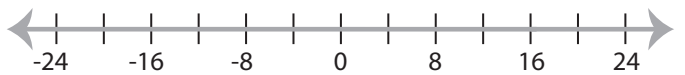
8) $x \geq -15$



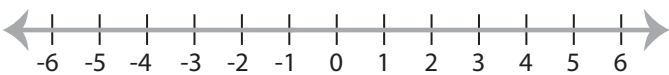
9) $x \leq -10$



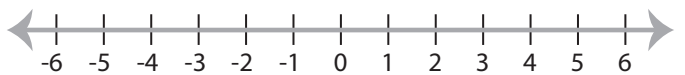
10) $x > 16$



11) $x > -1$



12) $x \geq -3$



Name : _____

Answer key

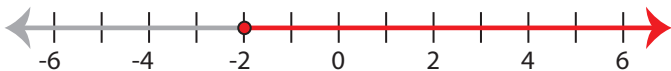
Score : _____

Graphing Inequalities

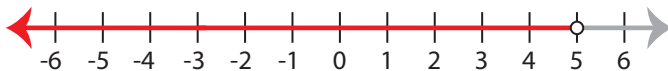
ES1

Graph the inequality :

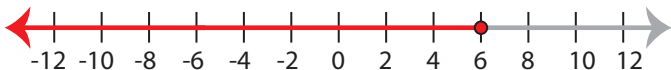
1) $x \geq -2$



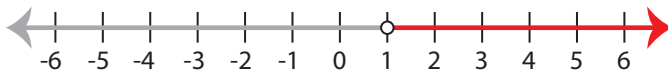
2) $x < 5$



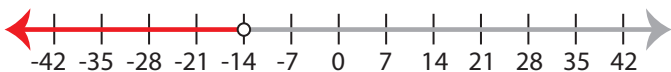
3) $x \leq 6$



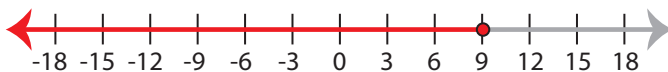
4) $x > 1$



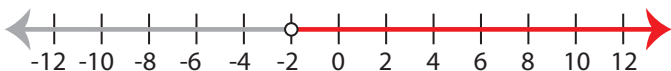
5) $x < -14$



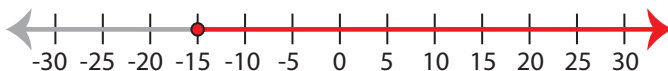
6) $x \leq 9$



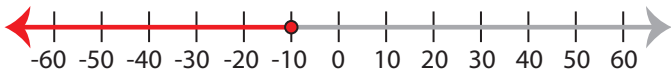
7) $x > -2$



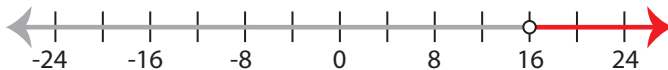
8) $x \geq -15$



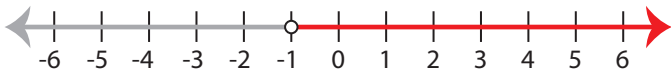
9) $x \leq -10$



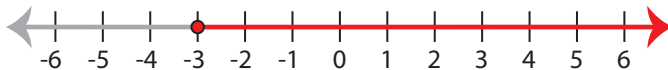
10) $x > 16$



11) $x > -1$



12) $x \geq -3$

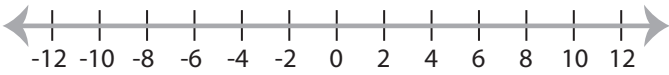


Graphing Inequalities

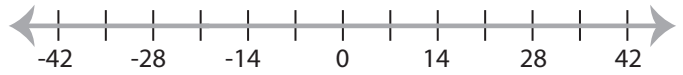
ES2

Graph the inequality :

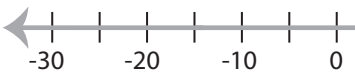
1) $x < -8$



2) $x \leq 14$



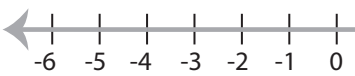
3) $x > 10$



4) $x \geq -3$

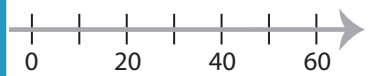


5) $x \leq -4$



PREVIEW

Access the largest collection of
worksheets for just **\$19.95** per year!



7) $x < -2$

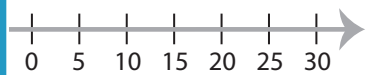


Members, please
log in to
download this
worksheet.

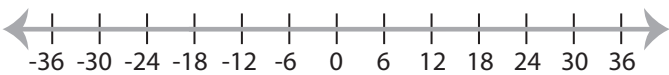
Log in

Not a member?
Please sign up to
gain complete
access.

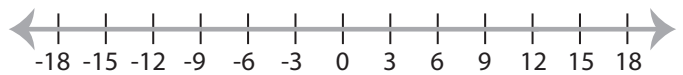
Sign up



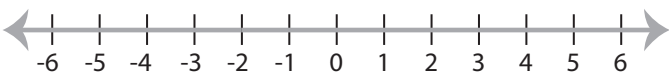
9) $x \geq -18$



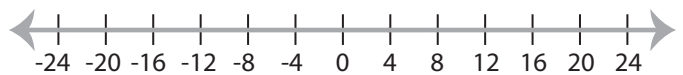
www.mathworksheets4kids.com



11) $x < -2$



12) $x \geq 4$

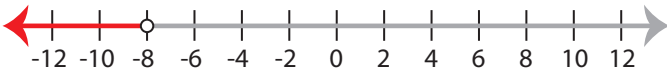


Graphing Inequalities

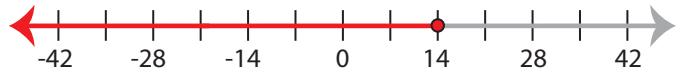
ES2

Graph the inequality :

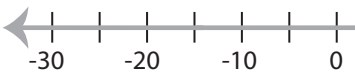
1) $x < -8$



2) $x \leq 14$



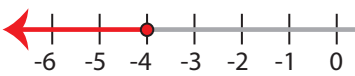
3) $x > 10$



4) $x \geq -3$



5) $x \leq -4$



PREVIEW

Access the largest collection of
worksheets for just **\$19.95** per year!



7) $x < -2$

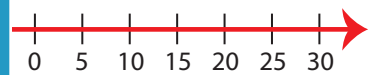


Members, please
log in to
download this
worksheet.

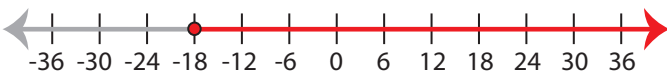
Log in

Not a member?
Please sign up to
gain complete
access.

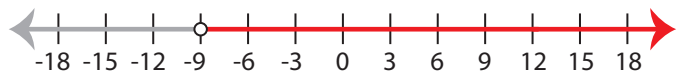
Sign up



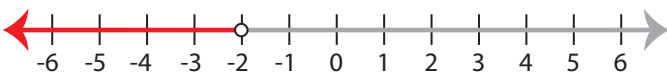
9) $x \geq -18$



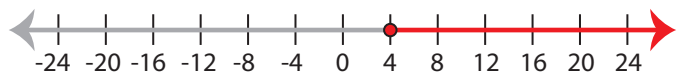
www.mathworksheets4kids.com



11) $x < -2$



12) $x \geq 4$

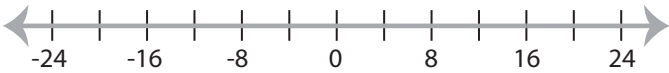


Graphing Inequalities

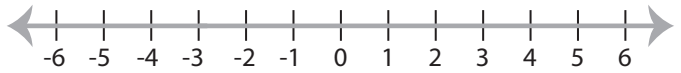
ES3

Graph the inequality :

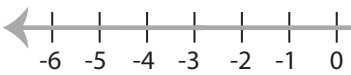
1) $x > 16$



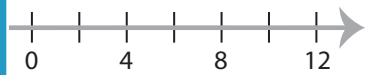
2) $x \leq 1$



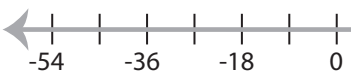
3) $x \geq 2$



4) $x < -4$

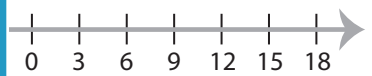


5) $x < 18$

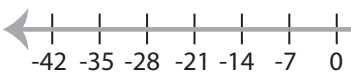


PREVIEW

Access the largest collection of
worksheets for just **\$19.95** per year!



7) $x > -7$

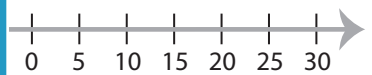


Members, please
log in to
download this
worksheet.

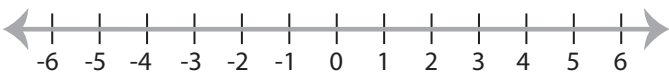
Log in

Not a member?
Please sign up to
gain complete
access.

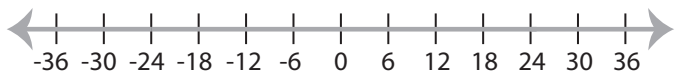
Sign up



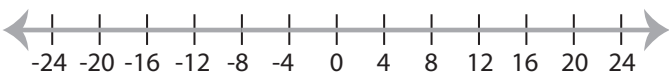
9) $x \leq -1$



www.mathworksheets4kids.com



11) $x < -8$



12) $x > 3$

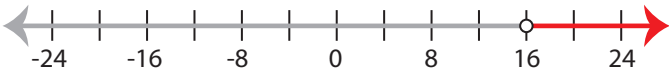


Graphing Inequalities

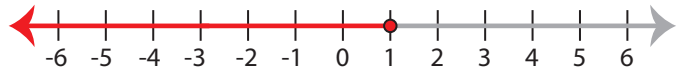
ES3

Graph the inequality :

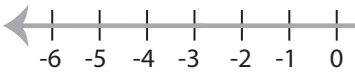
1) $x > 16$



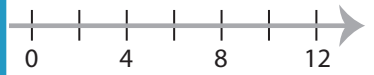
2) $x \leq 1$



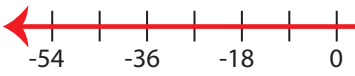
3) $x \geq 2$



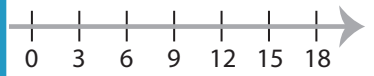
4) $x < -4$



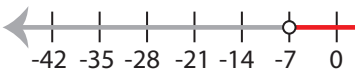
5) $x < 18$



PREVIEW
 Access the largest collection of
 worksheets for just **\$19.95** per year!

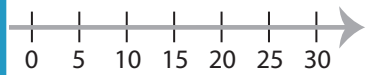


7) $x > -7$

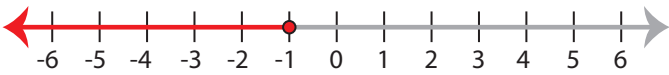


Members, please
 log in to
 download this
 worksheet.
Log in

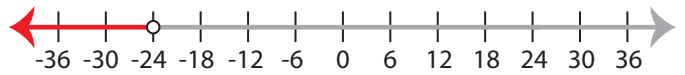
Not a member?
 Please sign up to
 gain complete
 access.
Sign up



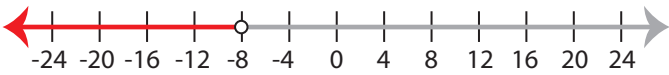
9) $x \leq -1$



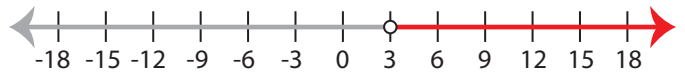
www.mathworksheets4kids.com



11) $x < -8$



12) $x > 3$

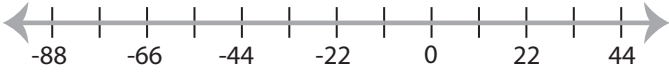


Graphing Inequalities

MS1

Graph the inequality :

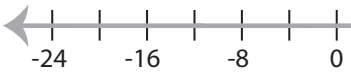
1) $x > -11$



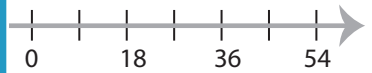
2) $x < 15$



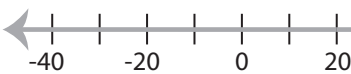
3) $x \leq 12$



4) $x \geq -27$

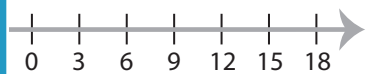


5) $x \geq 20$

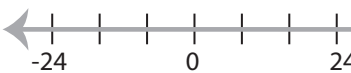


PREVIEW

Access the largest collection of
worksheets for just **\$19.95** per year!



7) $x > 40$

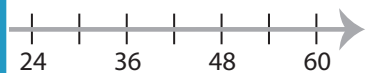


Members, please
log in to
download this
worksheet.

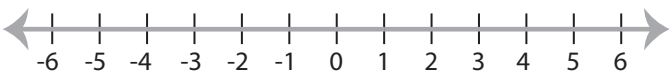
Log in

Not a member?
Please sign up to
gain complete
access.

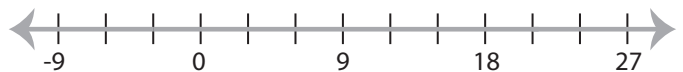
Sign up



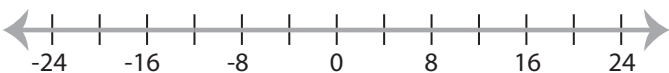
9) $x \geq 1$



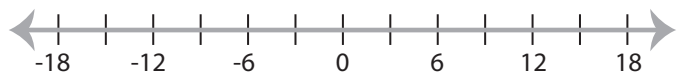
www.mathworksheets4kids.com



11) $x < -12$



12) $x \leq 3$



Graphing Inequalities

MS1

Graph the inequality :

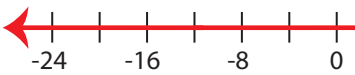
1) $x > -11$



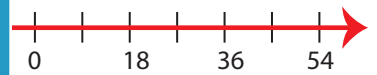
2) $x < 15$



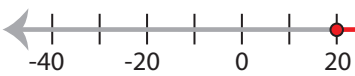
3) $x \leq 12$



4) $x \geq -27$



5) $x \geq 20$

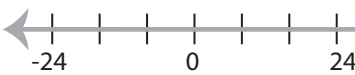


PREVIEW

Access the largest collection of
worksheets for just **\$19.95** per year!



7) $x > 40$

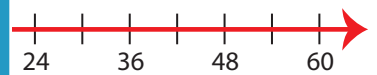


Members, please
log in to
download this
worksheet.

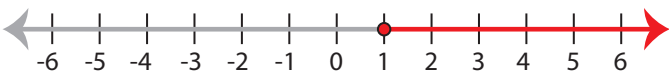
Log in

Not a member?
Please sign up to
gain complete
access.

Sign up



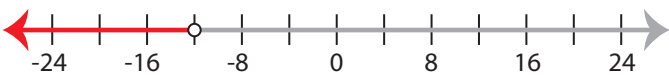
9) $x \geq 1$



www.mathworksheets4kids.com



11) $x < -12$



12) $x \leq 3$



Name : _____

Score : _____

Graphing Inequalities

MS2

Graph the inequality :

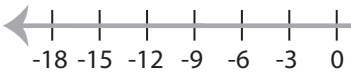
1) $x \leq 35$



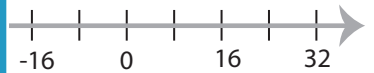
2) $x < 8$



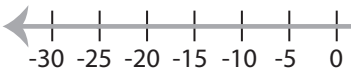
3) $x \leq 12$



4) $x \geq -40$



5) $x \geq -25$



PREVIEW
Access the largest collection of
worksheets for just **\$19.95** per year!

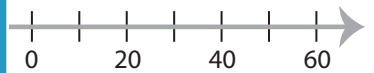
Members, please
log in to
download this
worksheet.

Log in

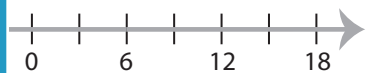
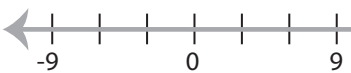
Not a member?
Please sign up to
gain complete
access.

Sign up

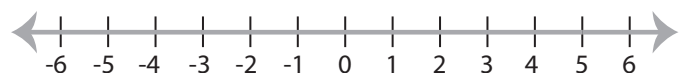
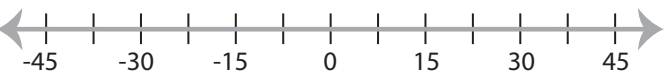
www.mathworksheets4kids.com



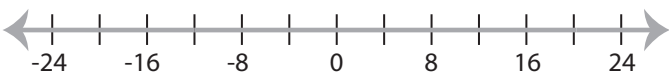
7) $x > 6$



9) $x < 15$



11) $x > 20$



12) $x \leq 18$



Name : _____

Answer key

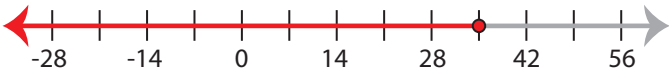
Score : _____

Graphing Inequalities

MS2

Graph the inequality :

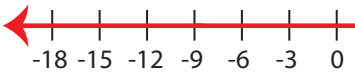
1) $x \leq 35$



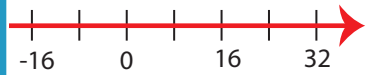
2) $x < 8$



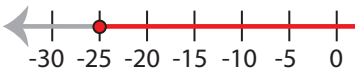
3) $x \leq 12$



4) $x \geq -40$



5) $x \geq -25$



PREVIEW
Access the largest collection of
worksheets for just **\$19.95** per year!

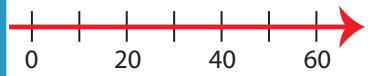
Members, please
log in to
download this
worksheet.

Log in

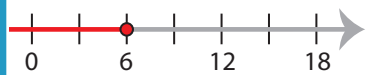
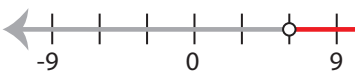
Not a member?
Please sign up to
gain complete
access.

Sign up

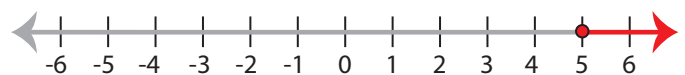
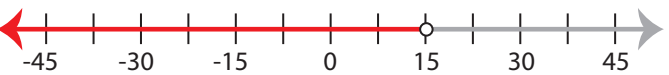
www.mathworksheets4kids.com



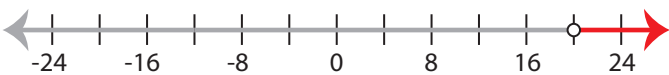
7) $x > 6$



9) $x < 15$



11) $x > 20$



12) $x \leq 18$



Name : _____

Score : _____

Graphing Inequalities

MS3

Graph the inequality :

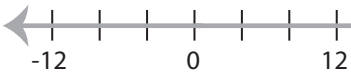
1) $x \leq -7$



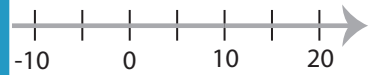
2) $x \leq 5$



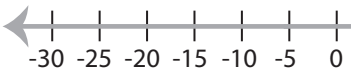
3) $x > 16$



4) $x \geq 10$



5) $x \leq -5$



PREVIEW
Access the largest collection of
worksheets for just **\$19.95** per year!

Members, please
log in to
download this
worksheet.

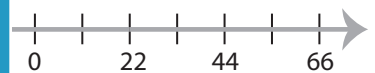
Log in

Not a member?
Please sign up to
gain complete
access.

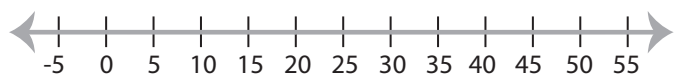
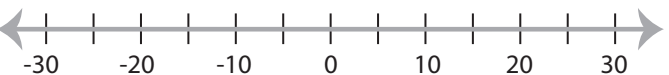
Sign up



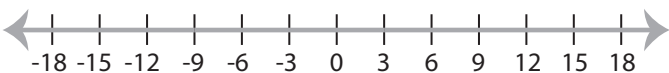
7) $x \geq -12$



9) $x < 15$



11) $x > 3$



12) $x \geq -14$



Graphing Inequalities

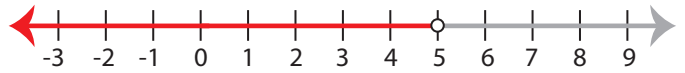
MS3

Graph the inequality :

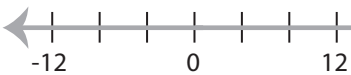
1) $x \leq -7$



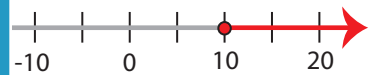
2) $x \leq 5$



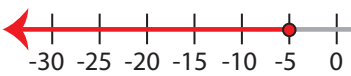
3) $x > 16$



4) $x \geq 10$

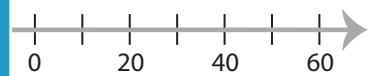


5) $x \leq -5$

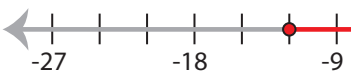


PREVIEW

Access the largest collection of
worksheets for just **\$19.95** per year!



7) $x \geq -12$

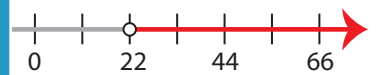


Members, please
log in to
download this
worksheet.

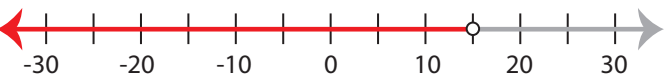
Log in

Not a member?
Please sign up to
gain complete
access.

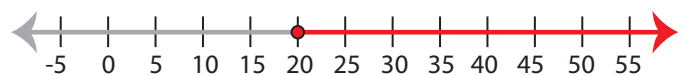
Sign up



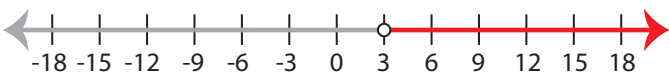
9) $x < 15$



www.mathworksheets4kids.com



11) $x > 3$



12) $x \geq -14$

