

Name : _____

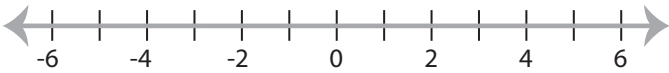
Score : _____

Graphing Inequalities

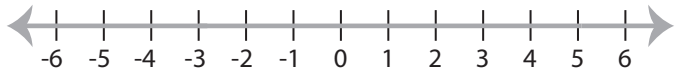
ES1

Graph the inequality :

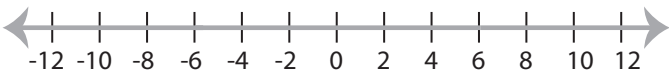
1) $x \geq -2$



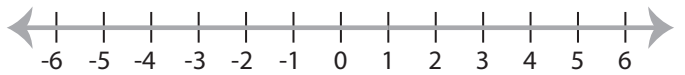
2) $x < 5$



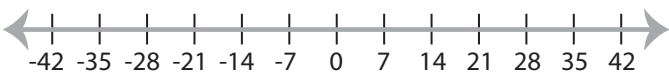
3) $x \leq 6$



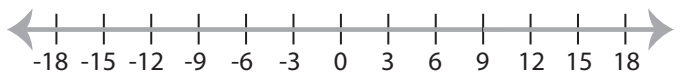
4) $x > 1$



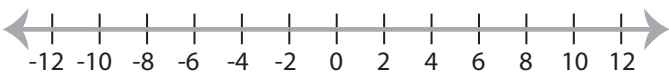
5) $x < -14$



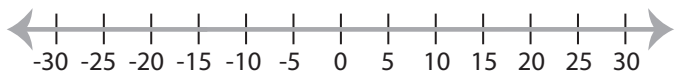
6) $x \leq 9$



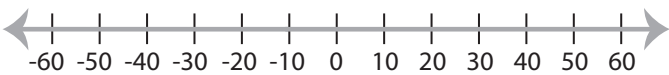
7) $x > -2$



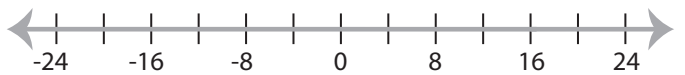
8) $x \geq -15$



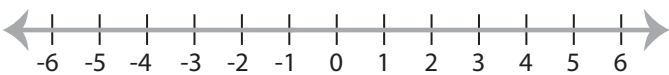
9) $x \leq -10$



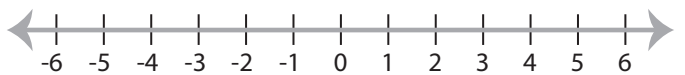
10) $x > 16$



11) $x > -1$



12) $x \geq -3$



Name : _____

Answer key

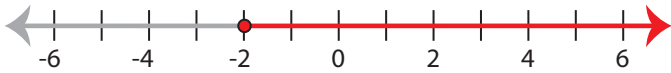
Score : _____

Graphing Inequalities

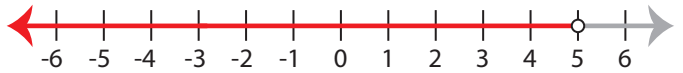
ES1

Graph the inequality :

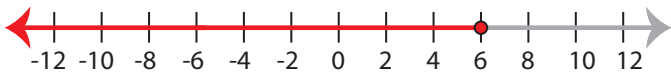
1) $x \geq -2$



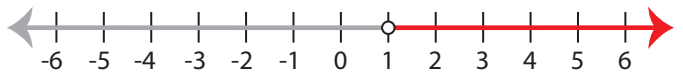
2) $x < 5$



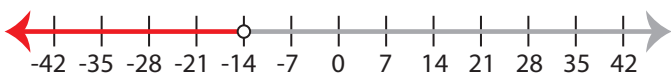
3) $x \leq 6$



4) $x > 1$



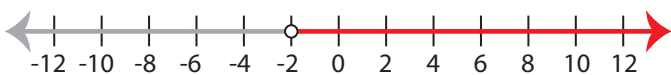
5) $x < -14$



6) $x \leq 9$



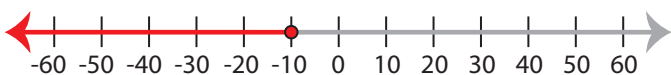
7) $x > -2$



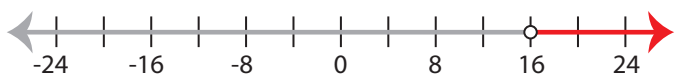
8) $x \geq -15$



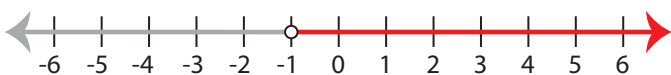
9) $x \leq -10$



10) $x > 16$



11) $x > -1$



12) $x \geq -3$

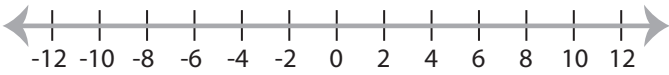


Graphing Inequalities

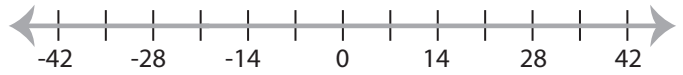
ES2

Graph the inequality :

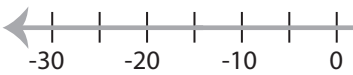
1) $x < -8$



2) $x \leq 14$



3) $x > 10$



4) $x \geq -3$

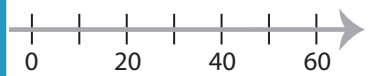


5) $x \leq -4$



PREVIEW

Access the largest collection of
worksheets for just **\$19.95** per year!



7) $x < -2$

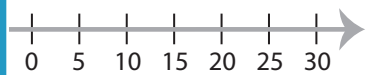


Members, please
log in to
download this
worksheet.

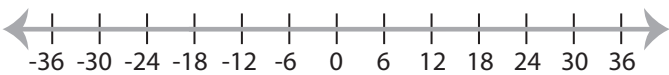
Log in

Not a member?
Please sign up to
gain complete
access.

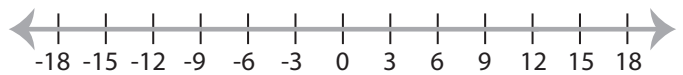
Sign up



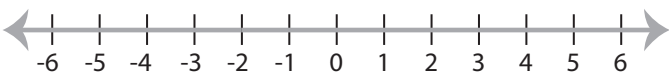
9) $x \geq -18$



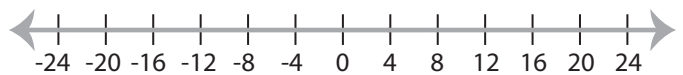
www.mathworksheets4kids.com



11) $x < -2$



12) $x \geq 4$

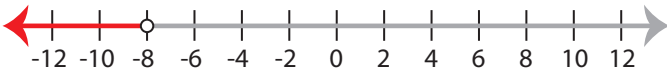


Graphing Inequalities

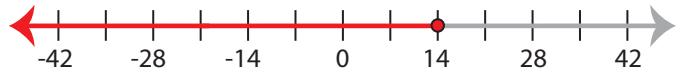
ES2

Graph the inequality :

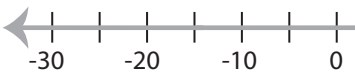
1) $x < -8$



2) $x \leq 14$



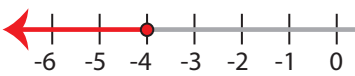
3) $x > 10$



4) $x \geq -3$



5) $x \leq -4$



PREVIEW

Access the largest collection of
worksheets for just **\$19.95** per year!



7) $x < -2$

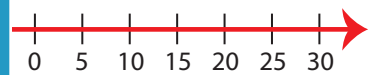


Members, please
log in to
download this
worksheet.

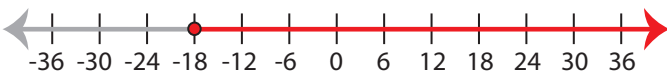
Log in

Not a member?
Please sign up to
gain complete
access.

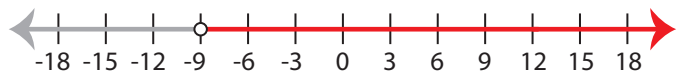
Sign up



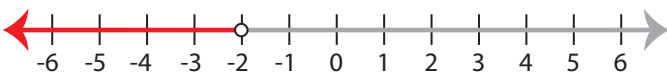
9) $x \geq -18$



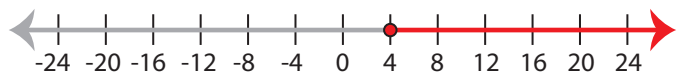
www.mathworksheets4kids.com



11) $x < -2$



12) $x \geq 4$

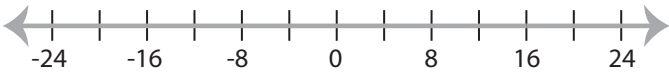


Graphing Inequalities

ES3

Graph the inequality :

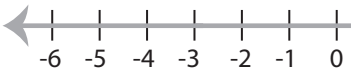
1) $x > 16$



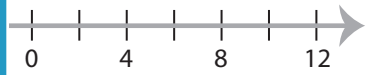
2) $x \leq 1$



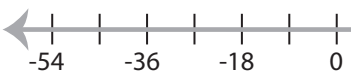
3) $x \geq 2$



4) $x < -4$

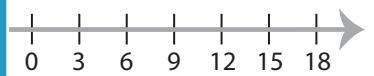


5) $x < 18$

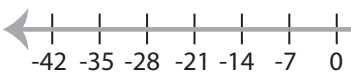


PREVIEW

Access the largest collection of
worksheets for just **\$19.95** per year!



7) $x > -7$

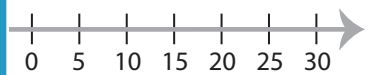


Members, please
log in to
download this
worksheet.

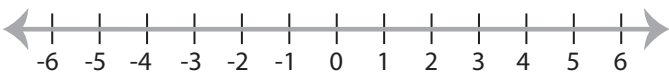
Log in

Not a member?
Please sign up to
gain complete
access.

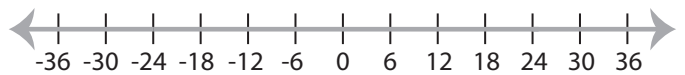
Sign up



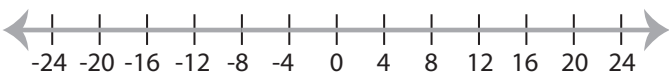
9) $x \leq -1$



www.mathworksheets4kids.com



11) $x < -8$



12) $x > 3$

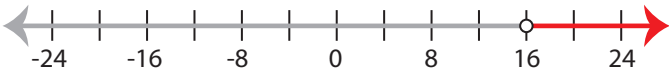


Graphing Inequalities

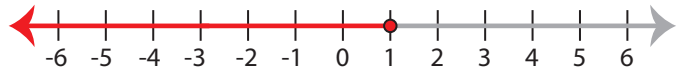
ES3

Graph the inequality :

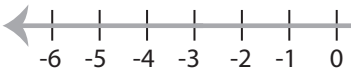
1) $x > 16$



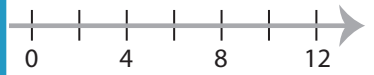
2) $x \leq 1$



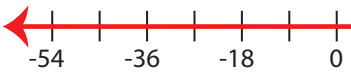
3) $x \geq 2$



4) $x < -4$

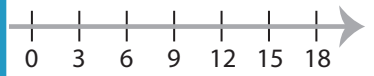


5) $x < 18$

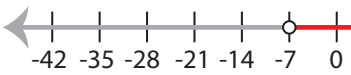


PREVIEW

Access the largest collection of
worksheets for just **\$19.95** per year!



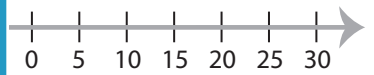
7) $x > -7$



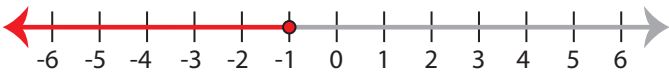
Members, please
log in to
download this
worksheet.

Log in

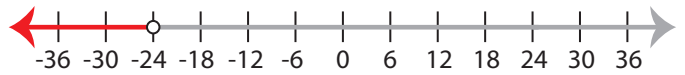
Sign up



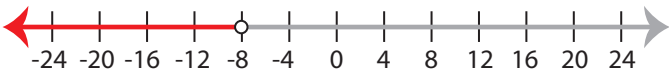
9) $x \leq -1$



www.mathworksheets4kids.com



11) $x < -8$



12) $x > 3$

