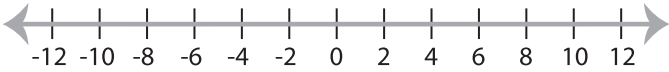


Graphing Inequalities

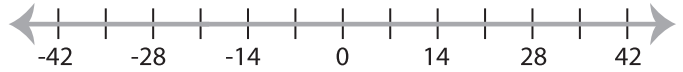
ES2

Graph the inequality :

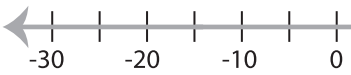
1) $x < -8$



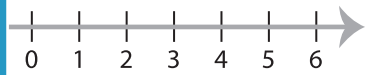
2) $x \leq 14$



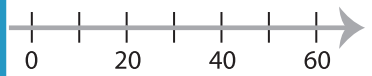
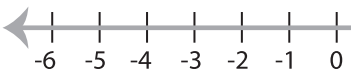
3) $x > 10$



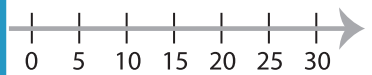
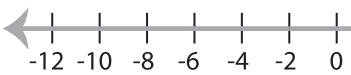
4) $x \geq -3$



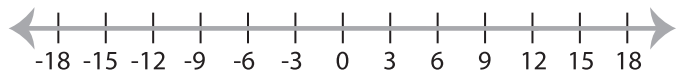
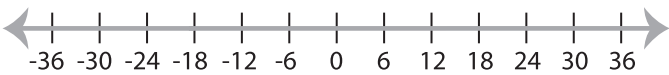
5) $x \leq -4$



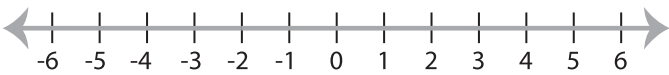
7) $x < -2$



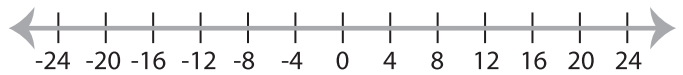
9) $x \geq -18$



11) $x < -2$



12) $x \geq 4$



PREVIEW

Gain complete access to the largest
collection of worksheets in all subjects!

Members, please
log in to
download this
worksheet.

Not a member?
Please sign up to
gain complete
access.

www.mathworksheets4kids.com