

Name : _____

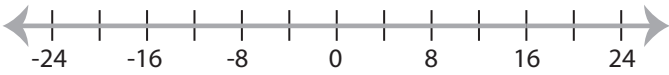
Score : _____

Graphing Inequalities

ES3

Graph the inequality :

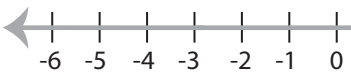
1) $x > 16$



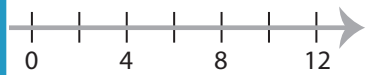
2) $x \leq 1$



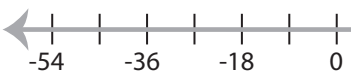
3) $x \geq 2$



4) $x < -4$



5) $x < 18$



PREVIEW
Access the largest collection of
worksheets for just **\$19.95** per year!

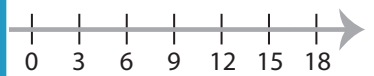
Members, please
log in to
download this
worksheet.

Log in

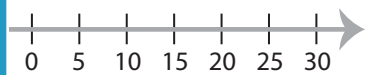
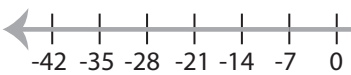
Not a member?
Please sign up to
gain complete
access.

Sign up

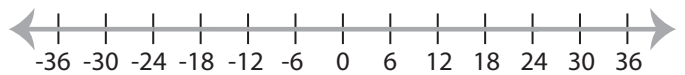
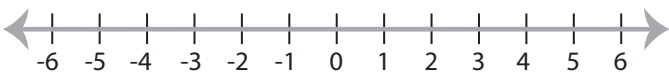
www.mathworksheets4kids.com



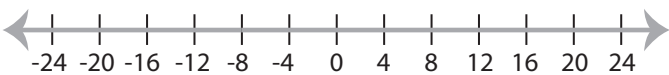
7) $x > -7$



9) $x \leq -1$



11) $x < -8$



12) $x > 3$

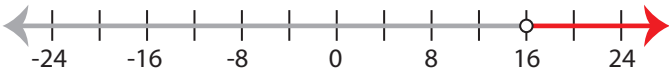


Graphing Inequalities

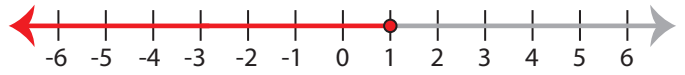
ES3

Graph the inequality :

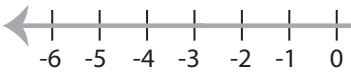
1) $x > 16$



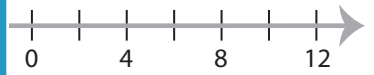
2) $x \leq 1$



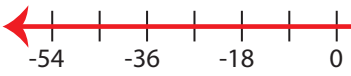
3) $x \geq 2$



4) $x < -4$

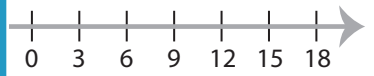


5) $x < 18$

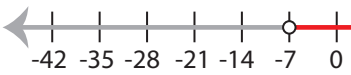


PREVIEW

Access the largest collection of
worksheets for just **\$19.95** per year!



7) $x > -7$

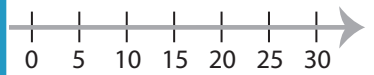


Members, please
log in to
download this
worksheet.

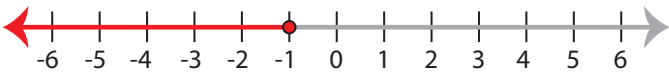
Log in

Not a member?
Please sign up to
gain complete
access.

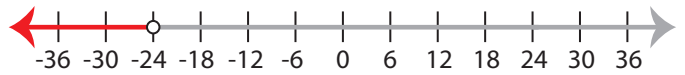
Sign up



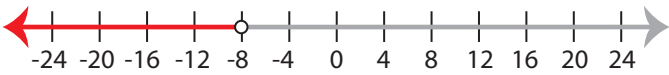
9) $x \leq -1$



www.mathworksheets4kids.com



11) $x < -8$



12) $x > 3$

