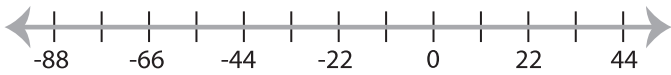


Graphing Inequalities

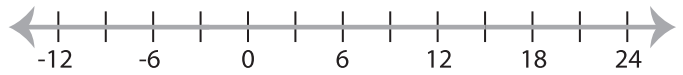
MS1

Graph the inequality :

1) $x > -11$



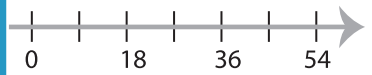
2) $x < 15$



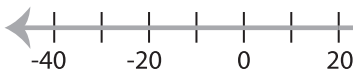
3) $x \leq 12$



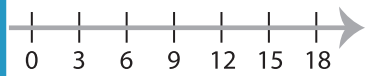
4) $x \geq -27$



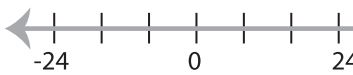
5) $x \geq 20$



PREVIEW
Gain complete access to the largest
collection of worksheets in all subjects!



7) $x > 40$

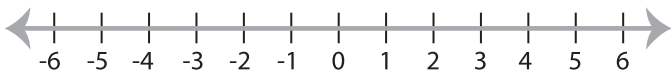


Members, please
log in to
download this
worksheet.

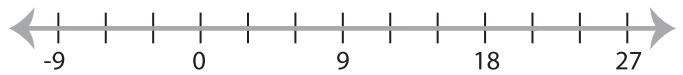
Not a member?
Please sign up to
gain complete
access.



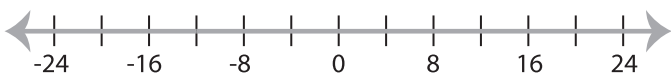
9) $x \geq 1$



www.mathworksheets4kids.com



11) $x < -12$



12) $x \leq 3$

