

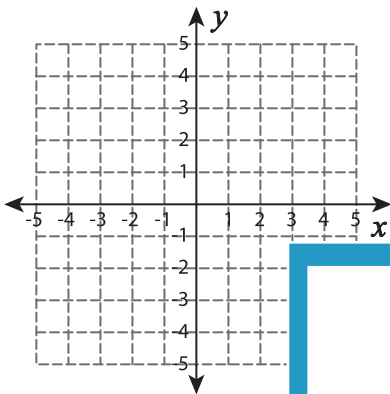
Name : _____

Graphing Linear Inequalities

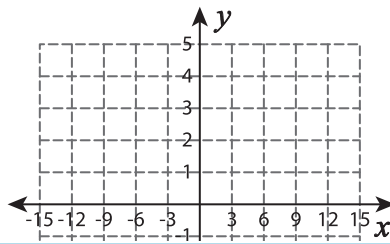
L2S1

Sketch the graph of each linear inequality.

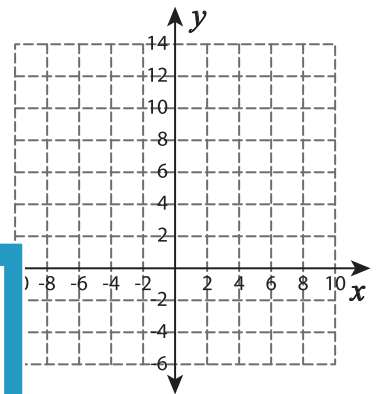
1) $-2x - 7 < -3y$



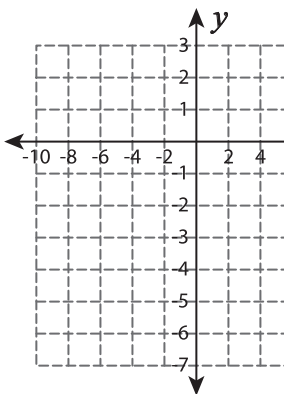
2) $-\frac{2}{3}x - 1 < -y$



3) $-7x + 5y \leq -6$



4) $x - 2y \leq 4$



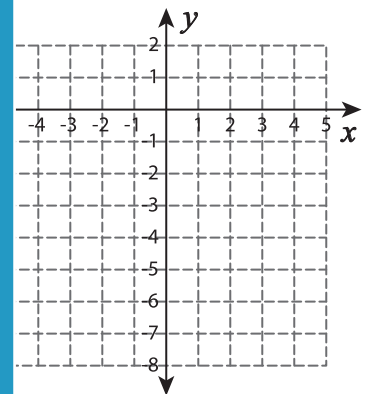
Gain complete access to the largest collection of worksheets in all subjects!

Members, please log in to download this worksheet.

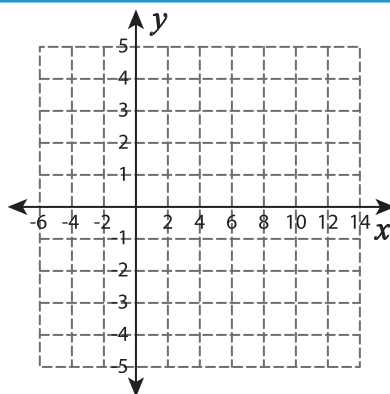
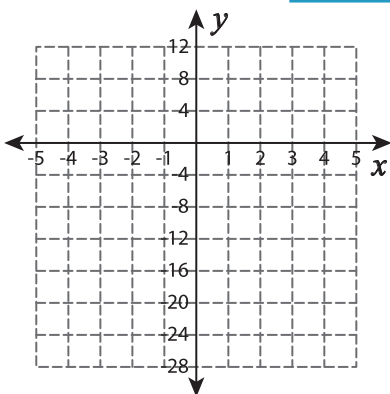
Not a member? Please sign up to gain complete access.

www.mathworksheets4kids.com

$< -y$



7) $-4x + 12 > -3y$



$-\frac{1}{6}x > -1$

