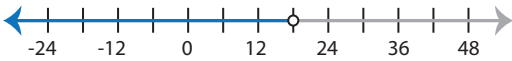


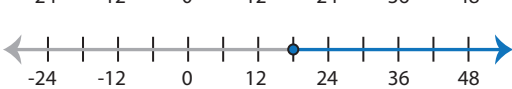


# Identifying Graphs

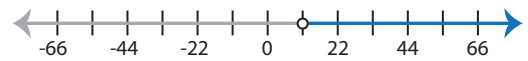
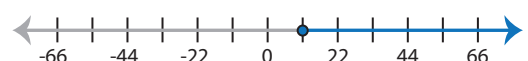

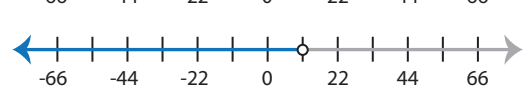
MS3

Choose the correct graph that best describes the solution for each inequality.





1)  $15 - 2x \leq \frac{5x}{9} - 31$

- a) 
- b) 
- c) 
- d) 

2)  $16x > 4(3x + 11)$

- a) 
- b) 
- c) 
- d) 

3)  $\frac{7x - 1}{10} > -5$

- a) 
- b) 
- c) 
- d) 

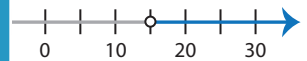
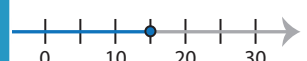

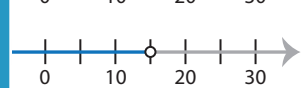
# PREVIEW

Gain complete access to the largest collection of worksheets in all subjects!


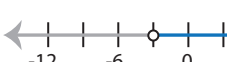

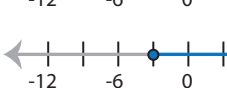
Members, please log in to download this worksheet.

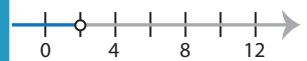
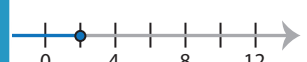

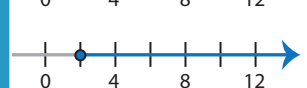
Not a member? Please sign up to gain complete access.

[www.mathworksheets4kids.com](http://www.mathworksheets4kids.com)

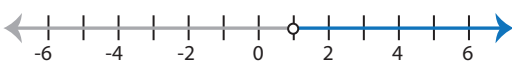


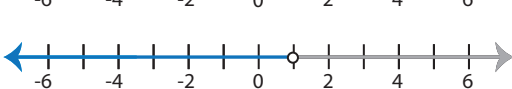
- 
- 
- 
- 

5)  $18x + 24 < 13x + 12$

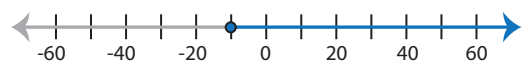
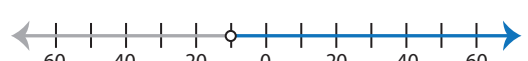
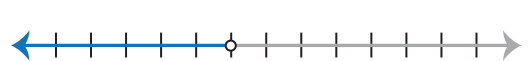
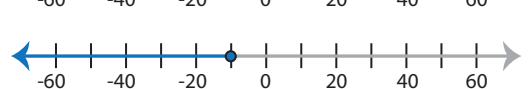
- a) 
- b) 
- c) 
- d) 

- 
- 
- 
- 

7)  $19x - 2 > 12x + 5$

- a) 
- b) 
- c) 
- d) 

8)  $x + 8 \leq \frac{x}{5}$

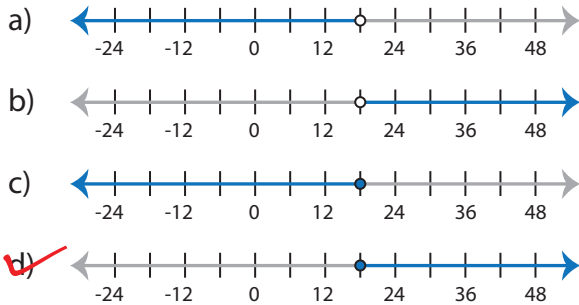
- a) 
- b) 
- c) 
- d) 

# Identifying Graphs

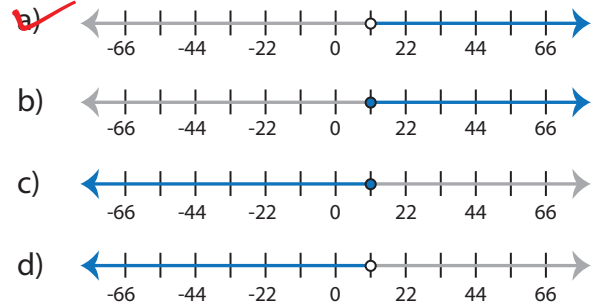
MS3

Choose the correct graph that best describes the solution for each inequality.

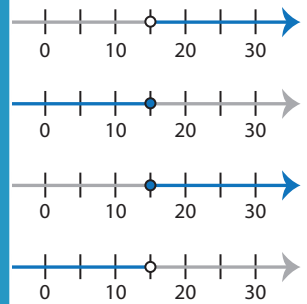
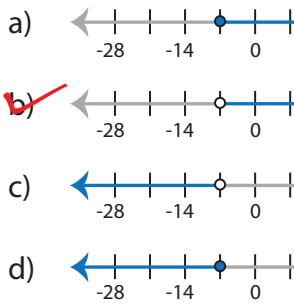
1)  $15 - 2x \leq \frac{5x}{9} - 31$



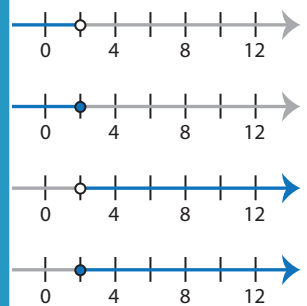
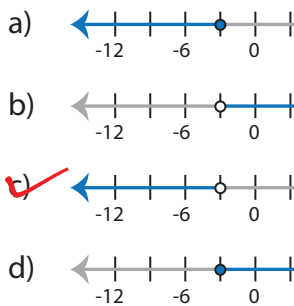
2)  $16x > 4(3x + 11)$



3)  $\frac{7x - 1}{10} > -5$



5)  $18x + 24 < 13x + 12$



# PREVIEW

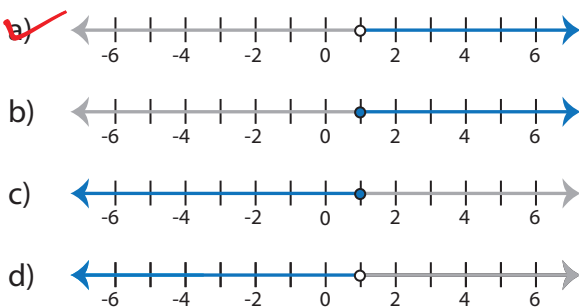
Gain complete access to the largest collection of worksheets in all subjects!

Members, please log in to download this worksheet.

Not a member? Please sign up to gain complete access.

[www.mathworksheets4kids.com](http://www.mathworksheets4kids.com)

7)  $19x - 2 > 12x + 5$



8)  $x + 8 \leq \frac{x}{5}$

