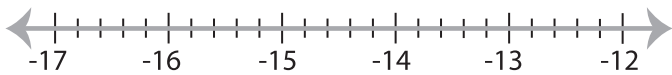


Solving & Graphing Inequalities

Decimals: S1

Solve each inequality and graph the solution.

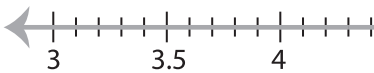
1) $2.4(7x + 4.8) < 16x$



2) $\frac{3x}{2} + 0.5x > 6.4$



3) $\frac{8x - 5.6}{7.2} \geq 4$



PREVIEW

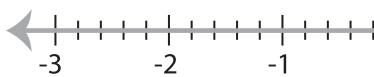
Gain complete access to the largest
collection of worksheets in all subjects!

Members, please
log in to
download this
worksheet.


Not a member?
Please sign up to
gain complete
access.

www.mathworksheets4kids.com

5) $6x - 2.8 < \frac{4x}{3}$



7) $17x - \frac{5x}{2} \geq -2.9$



8) $4.7 \leq \frac{6x - 1.85}{9.5}$

