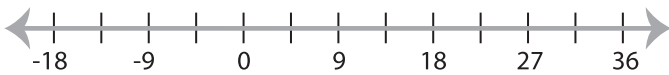


Solving & Graphing Inequalities

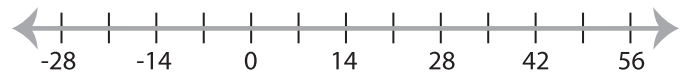
ES3

Solve each inequality and graph the solution.

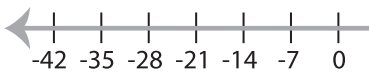
1) $x + \frac{5x}{6} > 33$



2) $\frac{3(x-10)}{9} < 6$



3) $\frac{2x+14}{8} \leq 7$



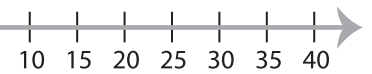
PREVIEW

Gain complete access to the largest
collection of worksheets in all subjects!

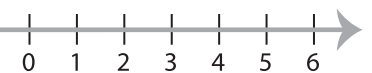
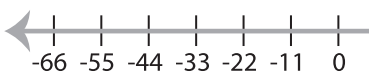
Members, please
log in to
download this
worksheet.

Not a member?
Please sign up to
gain complete
access.

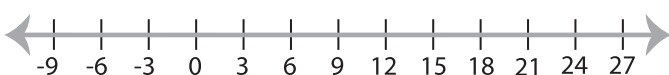
www.mathworksheets4kids.com



5) $\frac{7x-5}{4} \leq 18$



7) $2(4x+8) \geq 40$



8) $\frac{6x+4}{5} > 8$

