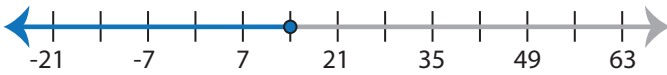


# Identifying Inequalities

MS5

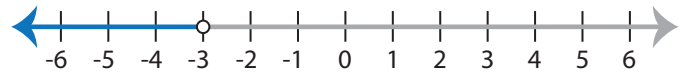
Choose the correct inequality that best describes each graph.

1)



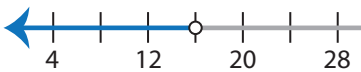
- a)  $1 < x - 13$                       b)  $x - 13 \geq 1$   
 c)  $1 > x - 13$                       d)  $x - 13 \leq 1$

2)



- a)  $5 > x + 8$                       b)  $x + 8 > 5$   
 c)  $x + 8 \leq 5$                       d)  $5 \leq x + 8$

3)



- a)  $\frac{x}{2} \leq 8$   
 c)  $8 > \frac{x}{2}$

# PREVIEW

Gain complete access to the largest  
collection of worksheets in all subjects!

Members, please  
log in to  
download this  
worksheet.

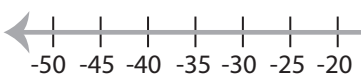
Not a member?  
Please sign up to  
gain complete  
access.

www.mathworksheets4kids.com



- b)  $7x \leq 28$   
 d)  $28 > 7x$

5)

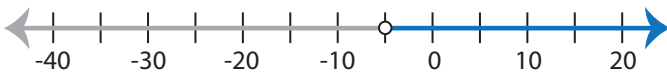


- a)  $-11 \geq x + 4$   
 c)  $-11 < x + 4$



- b)  $-3 > \frac{x}{9}$   
 d)  $\frac{x}{9} \geq -3$

7)



- a)  $-30 \leq 6x$                       b)  $6x \leq -30$   
 c)  $6x > -30$                       d)  $-30 > 6x$

8)



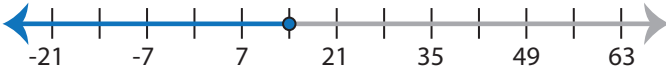
- a)  $-2 > x - 20$                       b)  $-2 < x - 20$   
 c)  $x - 20 \geq -2$                       d)  $x - 20 \leq -2$

**Identifying Inequalities**

MS5

Choose the correct inequality that best describes each graph.

1)



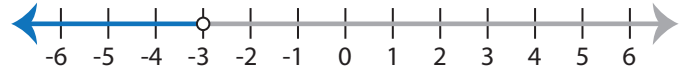
a)  $1 < x - 13$

b)  $x - 13 \geq 1$

c)  $1 > x - 13$

d)  $x - 13 \leq 1$

2)



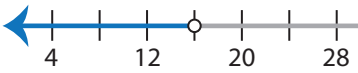
a)  $5 > x + 8$

b)  $x + 8 > 5$

c)  $x + 8 \leq 5$

d)  $5 \leq x + 8$

3)



a)  $\frac{x}{2} \leq 8$

c)  $8 > \frac{x}{2}$

**PREVIEW**

Gain complete access to the largest collection of worksheets in all subjects!

Members, please log in to download this worksheet.

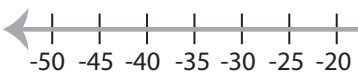
Not a member? Please sign up to gain complete access.

[www.mathworksheets4kids.com](http://www.mathworksheets4kids.com)

b)  $7x \leq 28$

d)  $28 > 7x$

5)



a)  $-11 \geq x + 4$

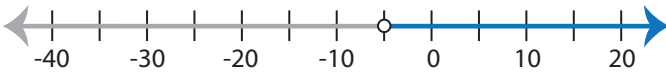
c)  $-11 < x + 4$



b)  $-3 > \frac{x}{9}$

d)  $\frac{x}{9} \geq -3$

7)



a)  $-30 \leq 6x$

b)  $6x \leq -30$

c)  $6x > -30$

d)  $-30 > 6x$

8)



a)  $-2 > x - 20$

b)  $-2 < x - 20$

c)  $x - 20 \geq -2$

d)  $x - 20 \leq -2$