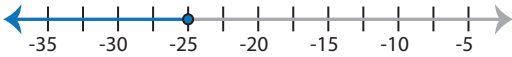





# Identifying Graphs



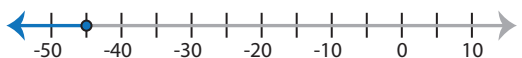

MS5

Choose the correct graph that best describes the solution for each inequality.


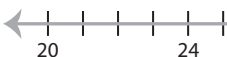


1)  $x + 6 < -19$

- a) 
- b) 
- c) 
- d) 

2)  $-9 \leq \frac{x}{5}$

- a) 
- b) 
- c) 
- d) 

3)  $\frac{x}{7} > 4$

- a) 
- b) 
- c) 
- d) 

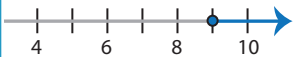

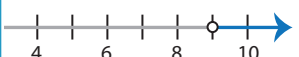

## PREVIEW

Gain complete access to the largest collection of worksheets in all subjects!

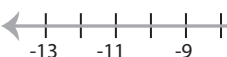
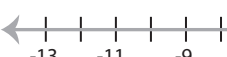

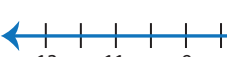
Members, please log in to download this worksheet.

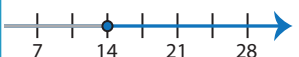
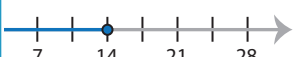
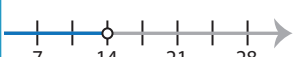

Not a member? Please sign up to gain complete access.

[www.mathworksheets4kids.com](http://www.mathworksheets4kids.com)

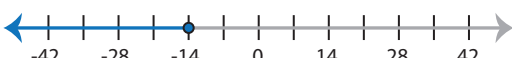

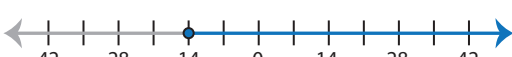

- a) 
- b) 
- c) 
- d) 

5)  $-32 \geq 8x$

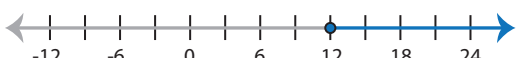
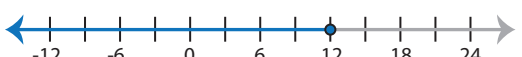
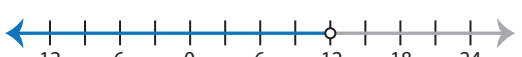
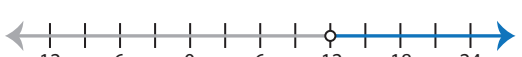
- a) 
- b) 
- c) 
- d) 

- a) 
- b) 
- c) 
- d) 

7)  $-15 \leq x - 1$

- a) 
- b) 
- c) 
- d) 

8)  $-2 + x \geq 10$



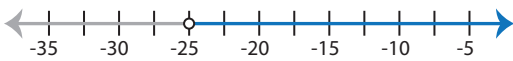
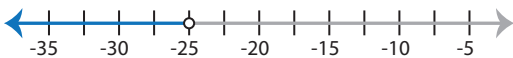
- a) 
- b) 
- c) 
- d) 

**Identifying Graphs**



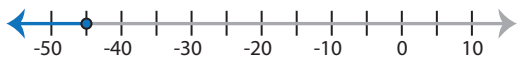
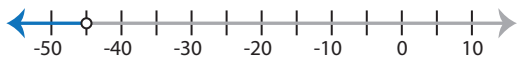
MS5

Choose the correct graph that best describes the solution for each inequality.

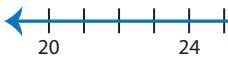



1)  $x + 6 < -19$

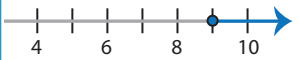
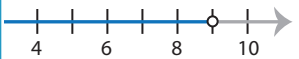
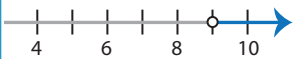
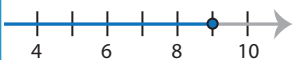
- a) 
- b) 
- c) 
- d) 

2)  $-9 \leq \frac{x}{5}$

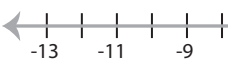
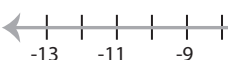
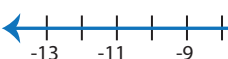

- a) 
- b) 
- c) 
- d) 

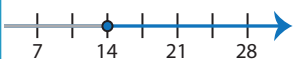
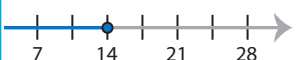
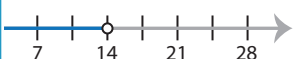

3)  $\frac{x}{7} > 4$

- a) 
- b) 
- c) 
- d) 

- a) 
- b) 
- c) 
- d) 

5)  $-32 \geq 8x$

- a) 
- b) 
- c) 
- d) 

- a) 
- b) 
- c) 
- d) 

**PREVIEW**

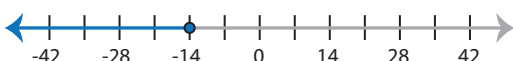
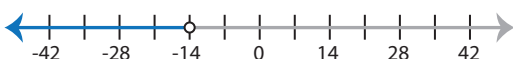

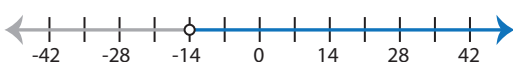
Gain complete access to the largest collection of worksheets in all subjects!

Members, please log in to download this worksheet.

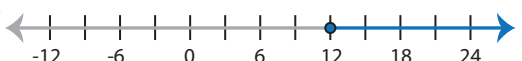


Not a member? Please sign up to gain complete access.

[www.mathworksheets4kids.com](http://www.mathworksheets4kids.com)

7)  $-15 \leq x - 1$

- a) 
- b) 
- c) 
- d) 

8)  $-2 + x \geq 10$

- a) 
- b) 
- c) 
- d) 