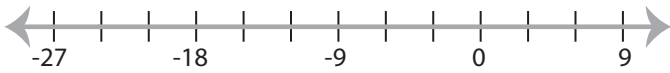


Solving & Graphing Inequalities

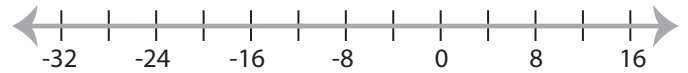
DS2

Solve each inequality and graph the solution.

1) $-29 \geq x - 5$



3) $\frac{x}{3} < -4$



3) $-22 \leq 11x$

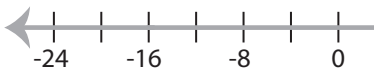


PREVIEW

Gain complete access to the largest
collection of worksheets in all subjects!



5) $-8 < \frac{x}{2}$



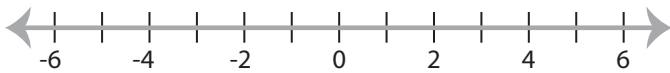
Members, please
log in to
download this
worksheet.

Not a member?
Please sign up to
gain complete
access.

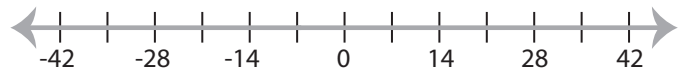
www.mathworksheets4kids.com



7) $24 \geq -8x$



8) $-21 > 3x$



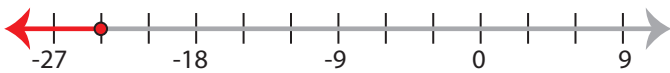
Solving & Graphing Inequalities

DS2

Solve each inequality and graph the solution.

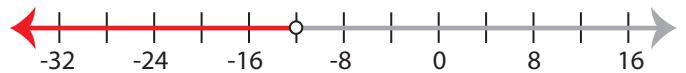
1) $-29 \geq x - 5$

$x \leq -24$



3) $\frac{x}{3} < -4$

$x < -12$



3) $-22 \leq 11x$

$x \geq -2$



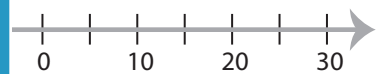
PREVIEW

Gain complete access to the largest collection of worksheets in all subjects!

Members, please log in to download this worksheet.

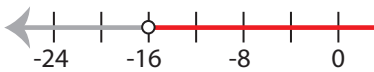
Not a member? Please sign up to gain complete access.

www.mathworksheets4kids.com



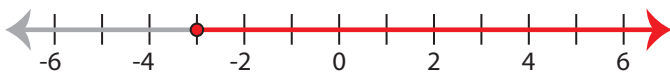
5) $-8 < \frac{x}{2}$

$x > -16$



7) $24 \geq -8x$

$x \geq -3$



8) $-21 > 3x$

$x < -7$

