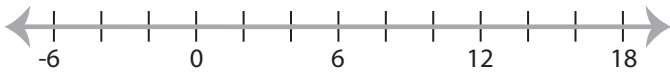


Solving & Graphing Inequalities

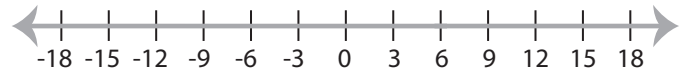
MS1

Solve each inequality and graph the solution.

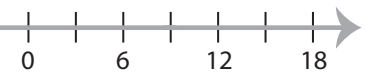
1) $32 \geq 8x$



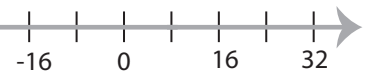
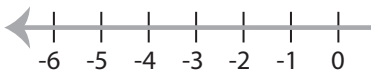
2) $\frac{x}{2} < 3$



3) $6 \leq x + 9$



5) $18 < 9x$



PREVIEW

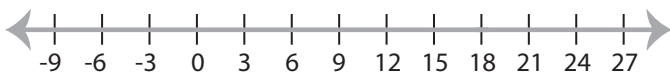
Gain complete access to the largest
collection of worksheets in all subjects!

Members, please
log in to
download this
worksheet.

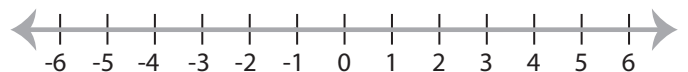
Not a member?
Please sign up to
gain complete
access.

www.mathworksheets4kids.com

7) $x - 15 > 3$



8) $x + 11 \leq 10$



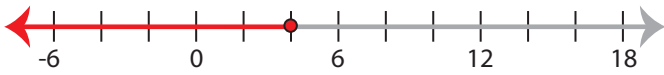
Solving & Graphing Inequalities

MS1

Solve each inequality and graph the solution.

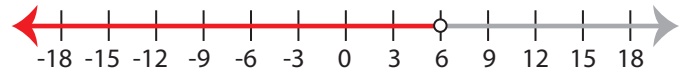
1) $32 \geq 8x$

$x \leq 4$



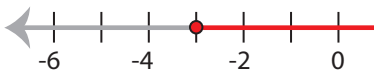
2) $\frac{x}{2} < 3$

$x < 6$



3) $6 \leq x + 9$

$x \geq -3$



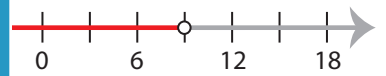
PREVIEW

Gain complete access to the largest collection of worksheets in all subjects!

Members, please log in to download this worksheet.

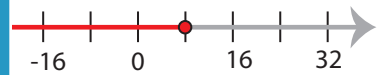
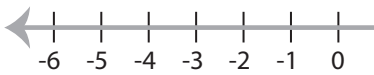
Not a member? Please sign up to gain complete access.

www.mathworksheets4kids.com



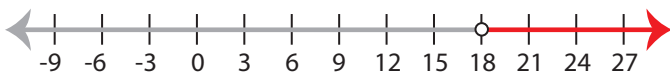
5) $18 < 9x$

$x > 2$



7) $x - 15 > 3$

$x > 18$



8) $x + 11 \leq 10$

$x \leq -1$

