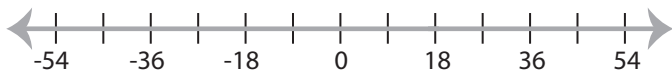


Solving & Graphing Inequalities

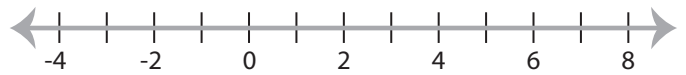
MS3

Solve each inequality and graph the solution.

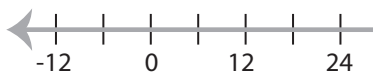
1) $3 > x - 15$



2) $12 \leq x + 15$

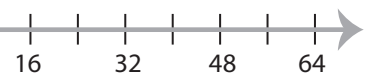


3) $\frac{x}{6} < 7$

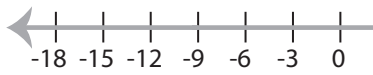


PREVIEW

Gain complete access to the largest
collection of worksheets in all subjects!



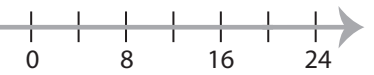
5) $x + 19 > 10$



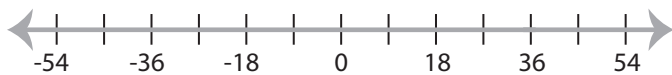
Members, please
log in to
download this
worksheet.

Not a member?
Please sign up to
gain complete
access.

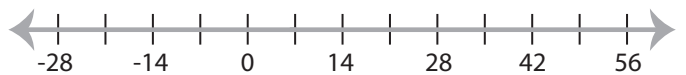
www.mathworksheets4kids.com



7) $12 \geq \frac{x}{3}$



8) $14 < 2x$



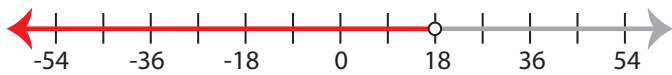
Solving & Graphing Inequalities

MS3

Solve each inequality and graph the solution.

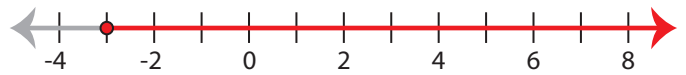
1) $3 > x - 15$

$x < 18$



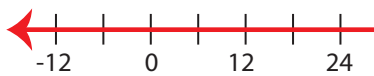
2) $12 \leq x + 15$

$x \geq -3$



3) $\frac{x}{6} < 7$

$x < 42$



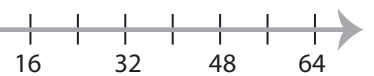
PREVIEW

Gain complete access to the largest collection of worksheets in all subjects!

Members, please log in to download this worksheet.

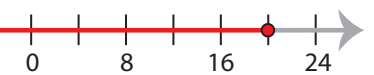
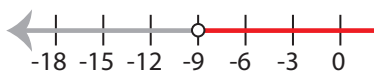
Not a member? Please sign up to gain complete access.

www.mathworksheets4kids.com



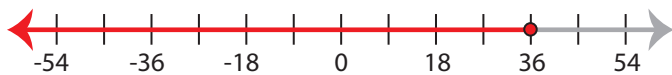
5) $x + 19 > 10$

$x > -9$



7) $12 \geq \frac{x}{3}$

$x \leq 36$



8) $14 < 2x$

$x > 7$

