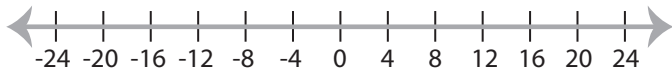


Solving & Graphing Inequalities

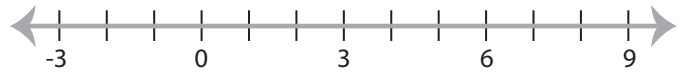
MS4

Solve each inequality and graph the solution.

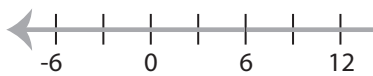
1) $x - 1 > 19$



2) $36 \geq 9x$

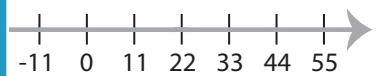


3) $18 < 3x$



PREVIEW

Gain complete access to the largest
collection of worksheets in all subjects!



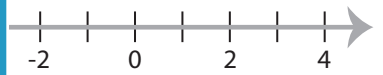
5) $6 \leq \frac{x}{5}$



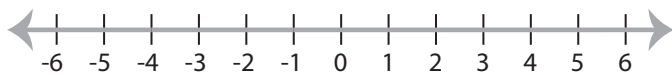
Members, please
log in to
download this
worksheet.

Not a member?
Please sign up to
gain complete
access.

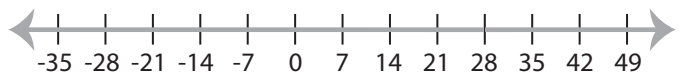
www.mathworksheets4kids.com



7) $11 \geq 12 + x$



8) $\frac{x}{7} > 4$



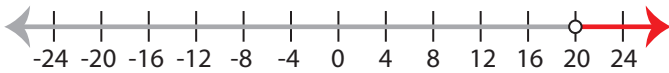
Solving & Graphing Inequalities

MS4

Solve each inequality and graph the solution.

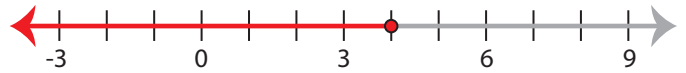
1) $x - 1 > 19$

$x > 20$



2) $36 \geq 9x$

$x \leq 4$



3) $18 < 3x$

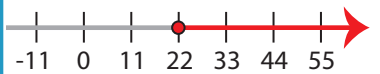
$x > 6$

**PREVIEW**

Gain complete access to the largest collection of worksheets in all subjects!

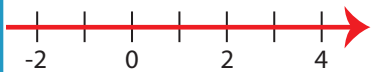
Members, please log in to download this worksheet.

Not a member? Please sign up to gain complete access.

www.mathworksheets4kids.com

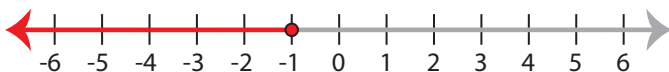
5) $6 \leq \frac{x}{5}$

$x \geq 30$



7) $11 \geq 12 + x$

$x \leq -1$



8) $\frac{x}{7} > 4$

$x > 28$

