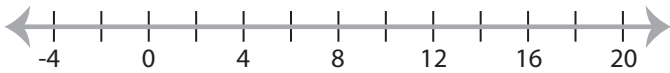


## Solving & Graphing Inequalities

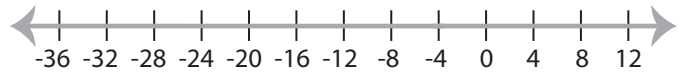
MS5

Solve each inequality and graph the solution.

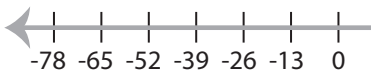
1)  $3 \leq \frac{x}{4}$



2)  $17 + x \geq 13$

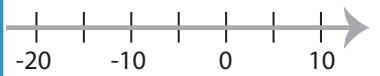


3)  $16 \geq x - 10$

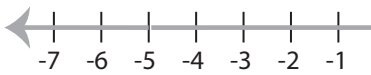


**PREVIEW**

Gain complete access to the largest  
collection of worksheets in all subjects!



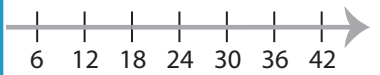
5)  $1 > x + 6$



Members, please  
log in to  
download this  
worksheet.

Not a member?  
Please sign up to  
gain complete  
access.

[www.mathworksheets4kids.com](http://www.mathworksheets4kids.com)



7)  $7x \geq 35$



8)  $8 \leq x - 14$



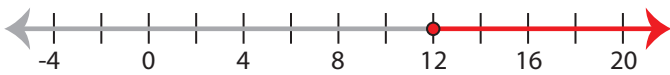
**Solving & Graphing Inequalities**

MS5

Solve each inequality and graph the solution.

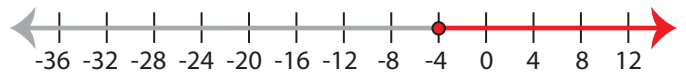
1)  $3 \leq \frac{x}{4}$

$x \geq 12$



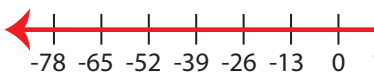
2)  $17 + x \geq 13$

$x \geq -4$



3)  $16 \geq x - 10$

$x \leq 26$



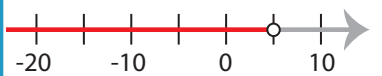
**PREVIEW**

Gain complete access to the largest  
collection of worksheets in all subjects!

Members, please  
log in to  
download this  
worksheet.

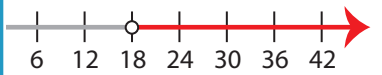
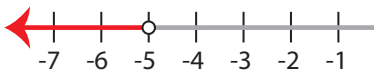
Not a member?  
Please sign up to  
gain complete  
access.

[www.mathworksheets4kids.com](http://www.mathworksheets4kids.com)



5)  $1 > x + 6$

$x < -5$



7)  $7x \geq 35$

$x \geq 5$



8)  $8 \leq x - 14$

$x \geq 22$

