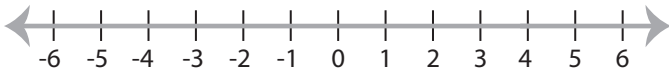


**Solving & Graphing Inequalities**

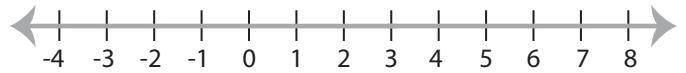
ES2

Solve each inequality and graph the solution.

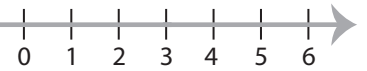
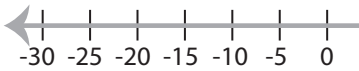
1)  $3x - 10 < 2$



2)  $5x + 9 \geq 24$



3)  $\frac{x-4}{2} > 3$

**PREVIEW**

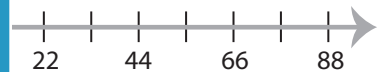
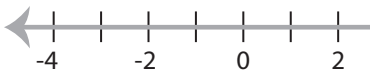
Gain complete access to the largest collection of worksheets in all subjects!

Members, please log in to download this worksheet.

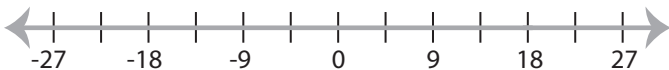
Not a member? Please sign up to gain complete access.

[www.mathworksheets4kids.com](http://www.mathworksheets4kids.com)

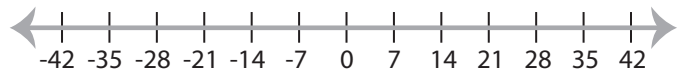
5)  $9x - 1 > 17$



7)  $\frac{x}{6} + 2 \leq 5$



8)  $4 + 2x < 18$



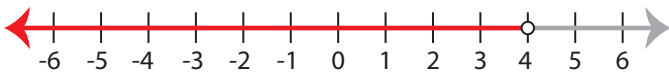
## Solving & Graphing Inequalities

ES2

Solve each inequality and graph the solution.

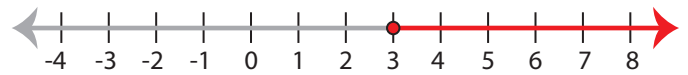
1)  $3x - 10 < 2$

$x < 4$



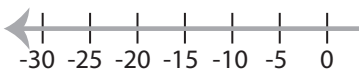
2)  $5x + 9 \geq 24$

$x \geq 3$



3)  $\frac{x-4}{2} > 3$

$x > 10$



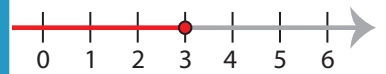
# PREVIEW

Gain complete access to the largest  
collection of worksheets in all subjects!

Members, please  
log in to  
download this  
worksheet.

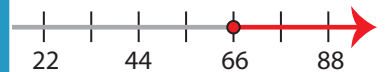
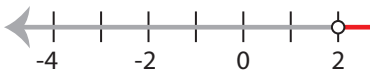
Not a member?  
Please sign up to  
gain complete  
access.

[www.mathworksheets4kids.com](http://www.mathworksheets4kids.com)



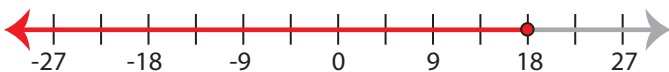
5)  $9x - 1 > 17$

$x > 2$



7)  $\frac{x}{6} + 2 \leq 5$

$x \leq 18$



8)  $4 + 2x < 18$

$x < 7$

