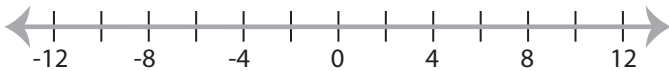


Solving & Graphing Inequalities

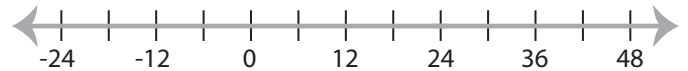
MS3

Solve each inequality and graph the solution.

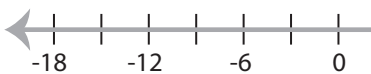
1) $2x + 9 \leq 5$



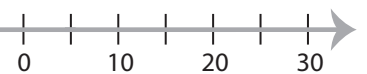
2) $5 < \frac{x}{2} - 7$



3) $6x - 1 > 17$



x



5) $\frac{x-1}{6} \leq 4$



PREVIEW

Gain complete access to the largest
collection of worksheets in all subjects!

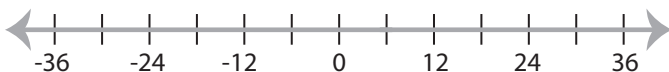
Members, please
log in to
download this
worksheet.

Not a member?
Please sign up to
gain complete
access.

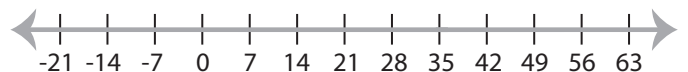
www.mathworksheets4kids.com



7) $9x - 35 > 19$



8) $10 \geq \frac{x-5}{3}$



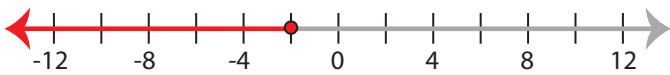
Solving & Graphing Inequalities

MS3

Solve each inequality and graph the solution.

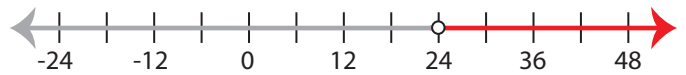
1) $2x + 9 \leq 5$

$x \leq -2$



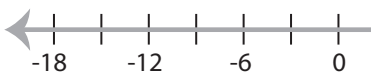
2) $5 < \frac{x}{2} - 7$

$x > 24$



3) $6x - 1 > 17$

$x > 3$



5) $\frac{x-1}{6} \leq 4$

$x \leq 25$



PREVIEW

Gain complete access to the largest
collection of worksheets in all subjects!

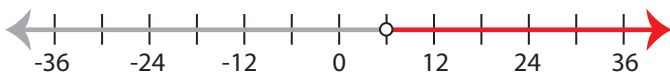
Members, please
log in to
download this
worksheet.

Not a member?
Please sign up to
gain complete
access.

www.mathworksheets4kids.com

7) $9x - 35 > 19$

$x > 6$



8) $10 \geq \frac{x-5}{3}$

$x \leq 35$

