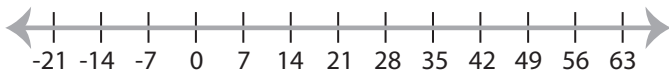


Solving & Graphing Inequalities

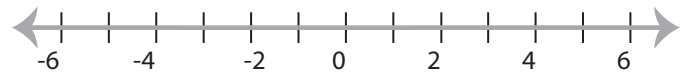
MS5

Solve each inequality and graph the solution.

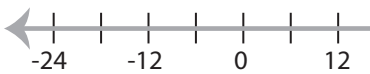
1) $9 > \frac{x-4}{5}$



2) $10x + 34 \geq 24$



3) $19 \leq 4x - 29$

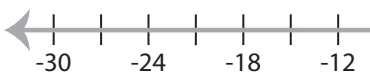


PREVIEW

Gain complete access to the largest
collection of worksheets in all subjects!



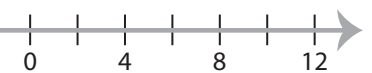
5) $15x - 21 > 16x$



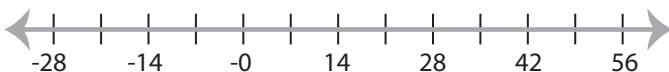
Members, please
log in to
download this
worksheet.

Not a member?
Please sign up to
gain complete
access.

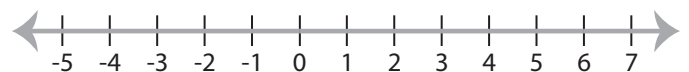
www.mathworksheets4kids.com



7) $6 \leq \frac{x}{3} - 8$



8) $3x - 10 < 8$



Solving & Graphing Inequalities

MS5

Solve each inequality and graph the solution.

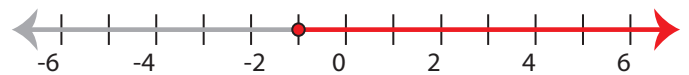
1) $9 > \frac{x-4}{5}$

$x < 49$



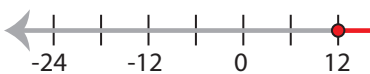
2) $10x + 34 \geq 24$

$x \geq -1$



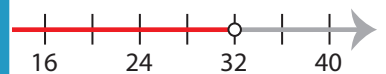
3) $19 \leq 4x - 29$

$x \geq 12$



PREVIEW

Gain complete access to the largest
collection of worksheets in all subjects!



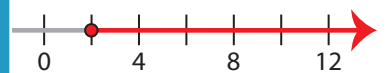
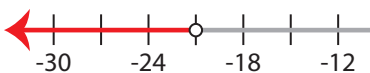
Members, please
log in to
download this
worksheet.

Not a member?
Please sign up to
gain complete
access.

www.mathworksheets4kids.com

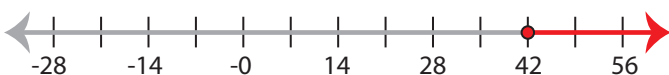
5) $15x - 21 > 16x$

$x < -21$



7) $6 \leq \frac{x}{3} - 8$

$x \geq 42$



8) $3x - 10 < 8$

$x < 6$

