

Name : _____

Score : _____

Writing Inequalities

ES1

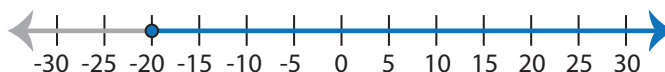
Write the inequality that best describes each graph :

1)



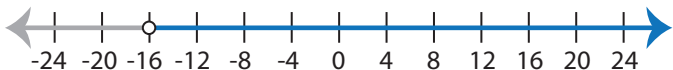
Inequality : _____

2)



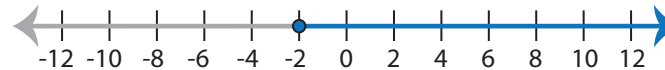
Inequality : _____

3)



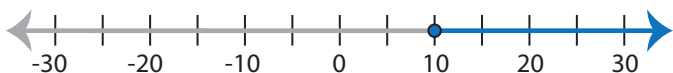
Inequality : _____

4)



Inequality : _____

5)



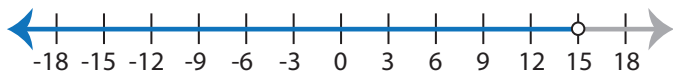
Inequality : _____

6)



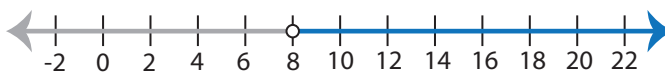
Inequality : _____

7)



Inequality : _____

8)



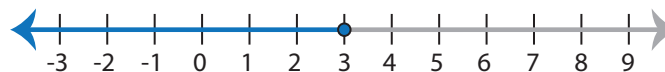
Inequality : _____

9)



Inequality : _____

10)



Inequality : _____

Name : _____

Answer key

Score : _____

Writing Inequalities

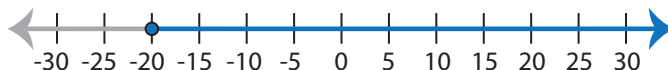
ES1

Write the inequality that best describes each graph :

1)

Inequality : $x \leq 4$

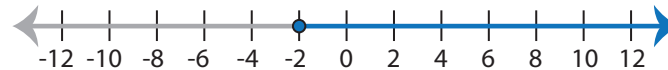
2)

Inequality : $x \geq -20$

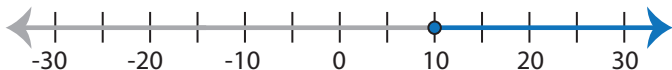
3)

Inequality : $x > -16$

4)

Inequality : $x \geq -2$

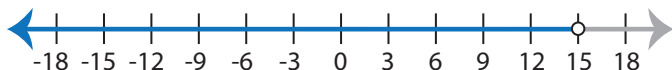
5)

Inequality : $x \geq 10$

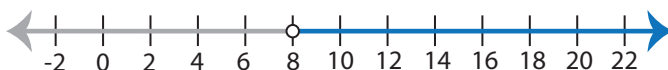
6)

Inequality : $x < 9$

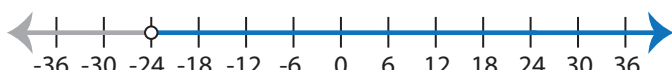
7)

Inequality : $x < 15$

8)

Inequality : $x > 8$

9)

Inequality : $x > -24$

10)

Inequality : $x \leq 3$