





**Integers - MCQ**

Sheet 1

- 1) Which integer is greater than  $-5$ ?
- a)  $-7$                       b)  $-1$                       c)  $-9$                       d)  $-11$
- 2) How many integers are there between  $-8$  and  $2$ ?
- a)  $7$                       b)  $4$                       c)  $0$                       d)  $9$
- 3) What is the opposite value of the integer  $6$ ?
- a)  $-6$                       b)  $5$                       c)  $6$                       d)  $-4$
- 4) Identify the integer that is less than  $-3$ .
- a)  $0$                       b)  $-1$                       c)  $-4$                       d)  $2$
- 5) Which of the following integers is greater than  $-1$  and lesser than  $7$ ?
- a)  $-9$                       b)  $5$                       c)  $-5$                       d)  $8$
- 6) How many pairs of opposite integers are there between  $-4$  and  $5$ ?
- a)  $3$                       b)  $8$                       c)  $2$                       d)  $6$
- 7) The following data shows the changes in temperatures across various cities from morning to noon. Which city recorded the maximum temperature?
- a)   $20^{\circ}\text{C}$   
Atlanta
- b)   $13^{\circ}\text{C}$   
Chicago
- c)   $12^{\circ}\text{C}$   
Boston
- d)   $25^{\circ}\text{C}$   
Houston

**Answer key****Integers - MCQ**

Sheet 1

1) Which integer is greater than  $-5$ ?a)  $-7$  b)  $-1$ c)  $-9$ d)  $-11$ 2) How many integers are there between  $-8$  and  $2$ ?a)  $7$ b)  $4$ c)  $0$  d)  $9$ 3) What is the opposite value of the integer  $6$ ? a)  $-6$ b)  $5$ c)  $6$ d)  $-4$ 4) Identify the integer that is less than  $-3$ .a)  $0$ b)  $-1$  c)  $-4$ d)  $2$ 5) Which of the following integers is greater than  $-1$  and lesser than  $7$ ?a)  $-9$  b)  $5$ c)  $-5$ d)  $8$ 6) How many pairs of opposite integers are there between  $-4$  and  $5$ ? a)  $3$ b)  $8$ c)  $2$ d)  $6$ 

7) The following data shows the changes in temperatures across various cities from morning to noon. Which city recorded the maximum temperature?

a)   $20^{\circ}\text{C}$   
Atlantab)   $13^{\circ}\text{C}$   
Chicagoc)   $12^{\circ}\text{C}$   
Boston d)   $25^{\circ}\text{C}$   
Houston