

Opposite Integers

Sheet 1

A) Write the opposite value of each integer.

1) Opposite of 12 _____

2) Opposite of -25 _____

3) Opposite of -99 _____

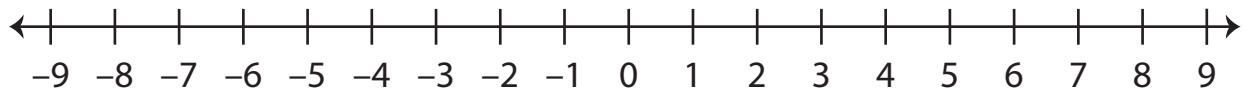
4) Opposite of 4 _____

5) Opposite of 36 _____

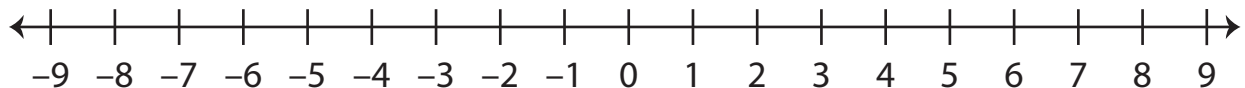
6) Opposite of -57 _____

B) Mark each integer given below and its opposite value on the number line.

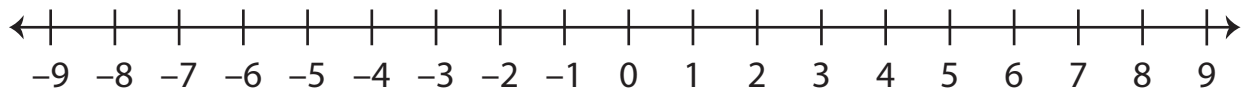
1) 2



2) -5



3) 1



C) Evaluate each expression.

1) Opposite of $-(-24)$ _____2) Opposite of $+(-8)$ _____3) Opposite of $+(+15)$ _____4) Opposite of $-(+33)$ _____5) Opposite of $+(-40)$ _____6) Opposite of $-(-6)$ _____

Answer key**Opposite Integers**

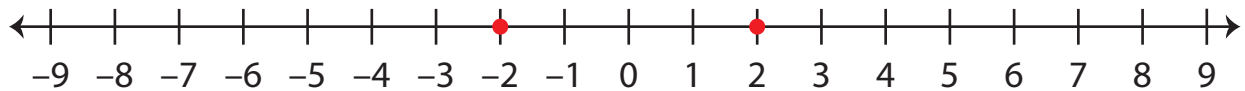
Sheet 1

A) Write the opposite value of each integer.

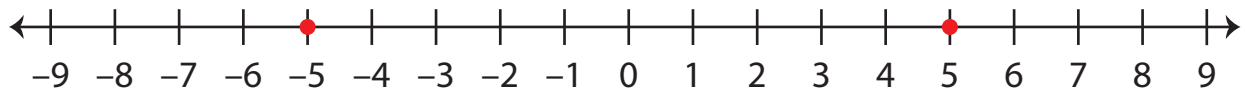
1) Opposite of 12 **-12** 2) Opposite of -25 **25** 3) Opposite of -99 **99** 4) Opposite of 4 **-4** 5) Opposite of 36 **-36** 6) Opposite of -57 **57**

B) Mark each integer given below and its opposite value on the number line.

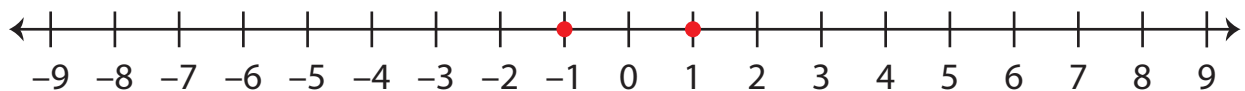
1) 2



2) -5



3) 1



C) Evaluate each expression.

1) Opposite of $-(-24)$ **-24** 2) Opposite of $+(-8)$ **8** 3) Opposite of $+(+15)$ **-15** 4) Opposite of $-(+33)$ **33** 5) Opposite of $+(-40)$ **40** 6) Opposite of $-(-6)$ **-6**

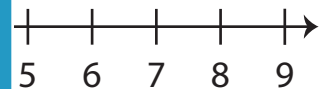
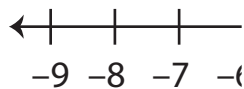
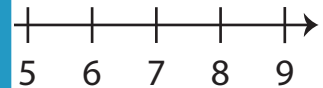
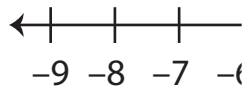
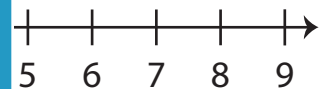
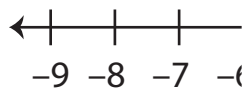
Opposite Integers

Sheet 2

A) Write the opposite value of each integer.

1) Opposite of -31 _____ 2) Opposite of 14 _____3) Opposite of 23 _____ 4) Opposite of -42 _____5) Opposite of -1 _____ 6) Opposite of 69 _____

B) Mark each integer on the number line.

1) -6 2) 4 3) -9 

C) Evaluate each expression.

1) Opposite of $+(-37)$ _____ 2) Opposite of $-(-41)$ _____3) Opposite of $-(-16)$ _____ 4) Opposite of $+(+5)$ _____5) Opposite of $-(+54)$ _____ 6) Opposite of $-(+22)$ _____

PREVIEW

Access the largest collection of
worksheets for just **\$19.95** per year!

Members, please
log in to
download this
worksheet.

Log in

Not a member?
Please sign up to
gain complete
access.

Sign up

www.mathworksheets4kids.com

Answer key**Opposite Integers**

Sheet 2

A) Write the opposite value of each integer.

1) Opposite of -31 31

2) Opposite of 14 -14

3) Opposite of 23 -23

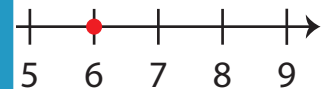
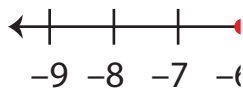
4) Opposite of -42 42

5) Opposite of -1 1

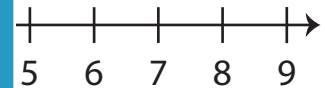
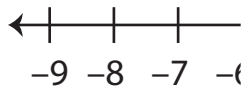
6) Opposite of 69 -69

B) Mark each integer on the number line.

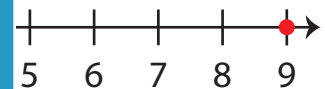
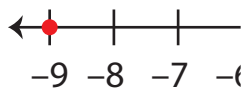
1) -6



2) 4



3) -9



C) Evaluate each expression.

1) Opposite of $+(-37)$ 37

2) Opposite of $-(-41)$ -41

3) Opposite of $-(-16)$ -16

4) Opposite of $+(+5)$ -5

5) Opposite of $-(+54)$ 54

6) Opposite of $-(+22)$ 22

PREVIEW

Access the largest collection of
worksheets for just **\$19.95** per year!

Members, please
log in to
download this
worksheet.

Log in

Not a member?
Please sign up to
gain complete
access.

Sign up

www.mathworksheets4kids.com

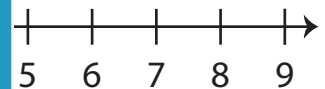
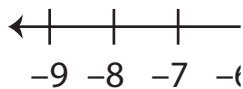
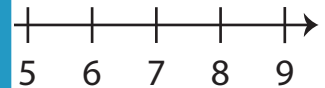
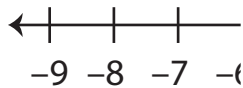
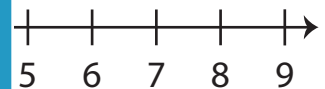
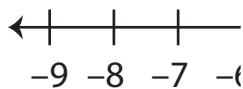
Opposite Integers

Sheet 3

A) Write the opposite value of each integer.

1) Opposite of -86 _____ 2) Opposite of -53 _____3) Opposite of -30 _____ 4) Opposite of 71 _____5) Opposite of 2 _____ 6) Opposite of 28 _____

B) Mark each integer on the number line.

1) 7 2) 3 3) -8 

C) Evaluate each expression.

1) Opposite of $+(+90)$ _____ 2) Opposite of $+(-11)$ _____3) Opposite of $+(-29)$ _____ 4) Opposite of $-(-56)$ _____5) Opposite of $-(-78)$ _____ 6) Opposite of $+(+35)$ _____

PREVIEW

Access the largest collection of
worksheets for just **\$19.95** per year!

Members, please
log in to
download this
worksheet.

Log in

Not a member?
Please sign up to
gain complete
access.

Sign up

www.mathworksheets4kids.com

Answer key**Opposite Integers**

Sheet 3

A) Write the opposite value of each integer.

1) Opposite of -86 86

2) Opposite of -53 53

3) Opposite of -30 30

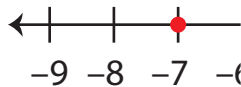
4) Opposite of 71 -71

5) Opposite of 2 -2

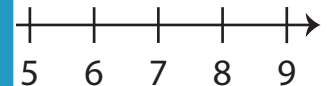
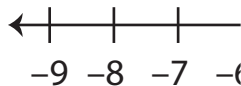
6) Opposite of 28 -28

B) Mark each integer on the number line.

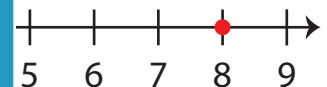
1) 7



2) 3



3) -8



C) Evaluate each expression.

1) Opposite of $+(+90)$ -90

2) Opposite of $+(-11)$ 11

3) Opposite of $+(-29)$ 29

4) Opposite of $-(-56)$ -56

5) Opposite of $-(-78)$ -78

6) Opposite of $+(+35)$ -35

PREVIEW

Access the largest collection of
worksheets for just **\$19.95** per year!

Members, please
log in to
download this
worksheet.

Log in

Not a member?
Please sign up to
gain complete
access.

Sign up

www.mathworksheets4kids.com