

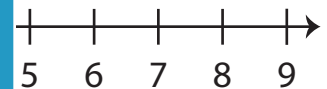
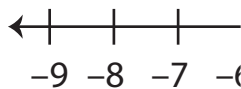
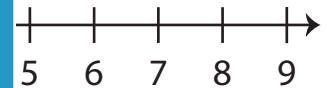
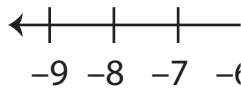
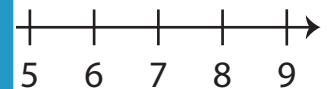
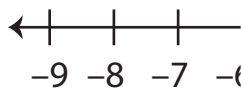
Opposite Integers

Sheet 2

A) Write the opposite value of each integer.

1) Opposite of -31 _____ 2) Opposite of 14 _____3) Opposite of 23 _____ 4) Opposite of -42 _____5) Opposite of -1 _____ 6) Opposite of 69 _____

B) Mark each integer on the number line.

1) -6 2) 4 3) -9 

C) Evaluate each expression.

1) Opposite of $+(-37)$ _____ 2) Opposite of $-(-41)$ _____3) Opposite of $-(-16)$ _____ 4) Opposite of $+(+5)$ _____5) Opposite of $-(+54)$ _____ 6) Opposite of $-(+22)$ _____

PREVIEW

Access the largest collection of
worksheets for just **\$19.95** per year!

Members, please
log in to
download this
worksheet.

Log in

Not a member?
Please sign up to
gain complete
access.

Sign up

www.mathworksheets4kids.com

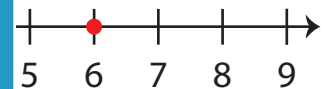
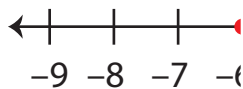
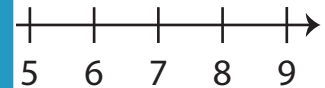
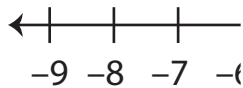
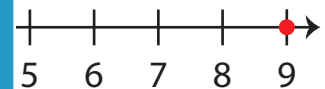
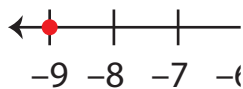
Answer key**Opposite Integers**

Sheet 2

A) Write the opposite value of each integer.

1) Opposite of -31 312) Opposite of 14 -14 3) Opposite of 23 -23 4) Opposite of -42 42 5) Opposite of -1 1 6) Opposite of 69 -69

B) Mark each integer on the number line.

1) -6 2) 4 3) -9 

C) Evaluate each expression.

1) Opposite of $+(-37)$ 37 2) Opposite of $-(-41)$ -41 3) Opposite of $-(-16)$ -16 4) Opposite of $+(+5)$ -5 5) Opposite of $-(+54)$ 54 6) Opposite of $-(+22)$ 22

PREVIEW

Access the largest collection of
worksheets for just **\$19.95** per year!

Members, please
log in to
download this
worksheet.

Log in

Not a member?
Please sign up to
gain complete
access.

Sign up

www.mathworksheets4kids.com