

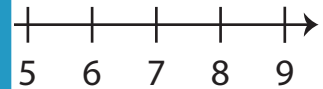
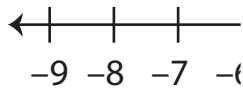
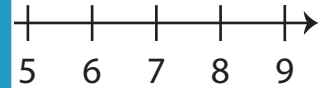
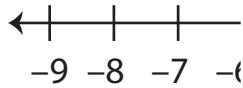
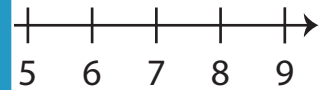
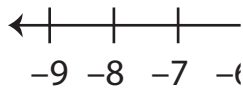
Opposite Integers

Sheet 3

A) Write the opposite value of each integer.

1) Opposite of -86 _____2) Opposite of -53 _____3) Opposite of -30 _____4) Opposite of 71 _____5) Opposite of 2 _____6) Opposite of 28 _____

B) Mark each integer on the number line.

1) 7 2) 3 3) -8 

C) Evaluate each expression.

1) Opposite of $+(+90)$ _____2) Opposite of $+(-11)$ _____3) Opposite of $+(-29)$ _____4) Opposite of $-(-56)$ _____5) Opposite of $-(-78)$ _____6) Opposite of $+(+35)$ _____

PREVIEW

Access the largest collection of
worksheets for just **\$19.95** per year!

Members, please
log in to
download this
worksheet.

Log in

Not a member?
Please sign up to
gain complete
access.

Sign up

www.mathworksheets4kids.com

Answer key**Opposite Integers**

Sheet 3

A) Write the opposite value of each integer.

1) Opposite of -86 86

2) Opposite of -53 53

3) Opposite of -30 30

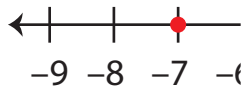
4) Opposite of 71 -71

5) Opposite of 2 -2

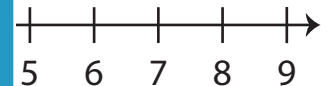
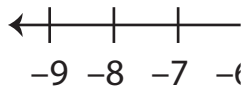
6) Opposite of 28 -28

B) Mark each integer on the number line.

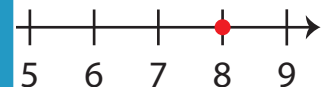
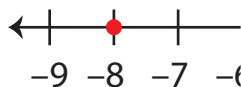
1) 7



2) 3



3) -8



C) Evaluate each expression.

1) Opposite of $+(+90)$ -90

2) Opposite of $+(-11)$ 11

3) Opposite of $+(-29)$ 29

4) Opposite of $-(-56)$ -56

5) Opposite of $-(-78)$ -78

6) Opposite of $+(+35)$ -35

PREVIEW

Access the largest collection of
worksheets for just **\$19.95** per year!

Members, please
log in to
download this
worksheet.

Log in

Not a member?
Please sign up to
gain complete
access.

Sign up

www.mathworksheets4kids.com