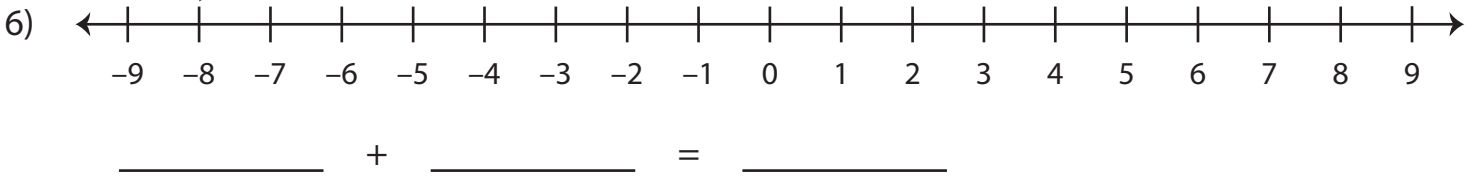
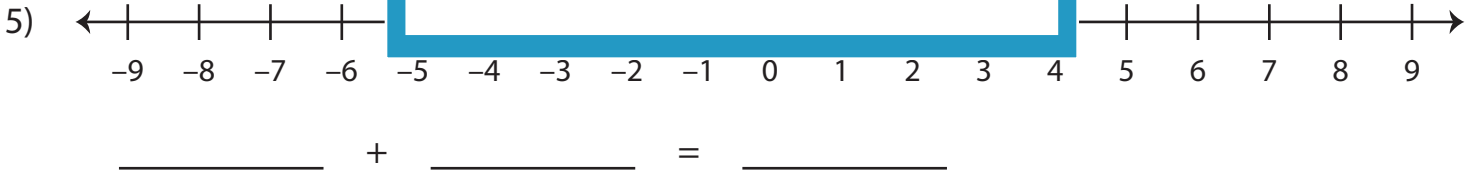
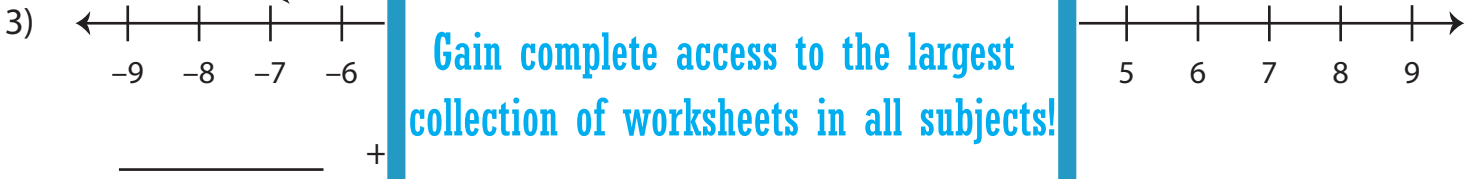
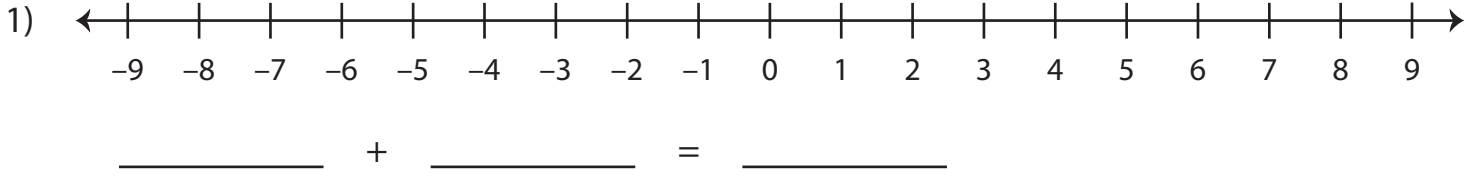


## Number Line - Addition Equation

Sheet 3

Write the addition equation that is represented on each number line.



# PREVIEW

Gain complete access to the largest  
collection of worksheets in all subjects!

Members, please  
log in to  
download this  
worksheet.

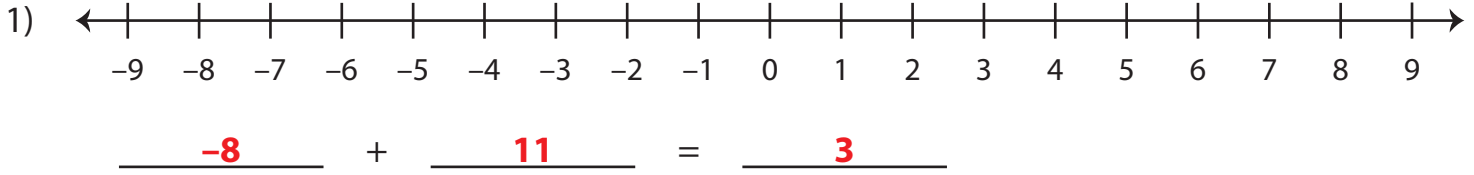
Not a member?  
Please sign up to  
gain complete  
access.

[www.mathworksheets4kids.com](http://www.mathworksheets4kids.com)

**Number Line - Addition Equation**

Sheet 3

Write the addition equation that is represented on each number line.



    4     +

**PREVIEW**

Gain complete access to the largest collection of worksheets in all subjects!

Members, please log in to download this worksheet.

Not a member? Please sign up to gain complete access.

[www.mathworksheets4kids.com](http://www.mathworksheets4kids.com)

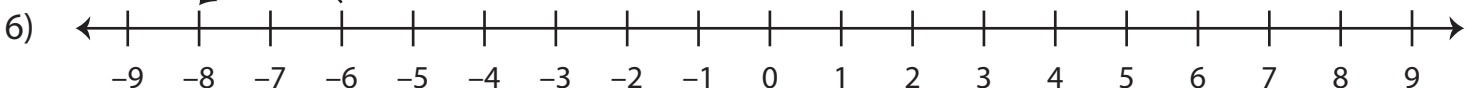
    1     +



   -3    +



   -9    +     7     =    -2   



   -6    +   (-2)   =    -8