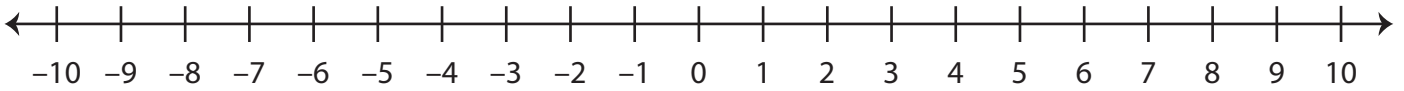


Ordering Integers

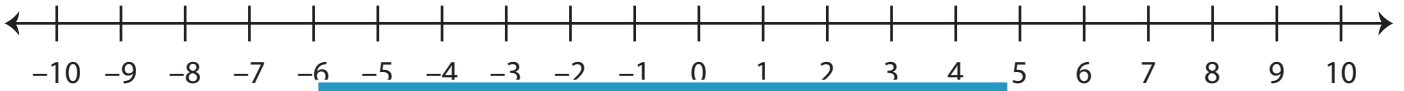
Sheet 1

A) Mark the integers on the number line and order them from the least to the greatest.

1) -9, 4, -5, 2



2) 10, 0, -3, -10



3) -7, 6, -8, 1



B) Mark the integers on the number line and order them from the least to the greatest.

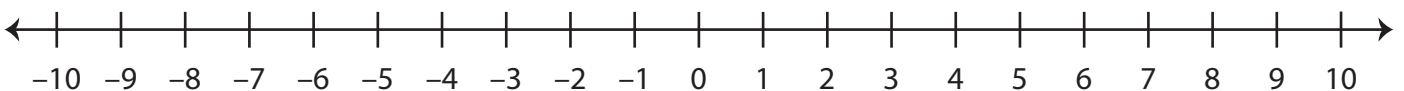
1) 3, -6, -4, 5



2) -2, -1, 9, -7



3) -5, 7, 8, -9



PREVIEW

Gain complete access to the largest
collection of worksheets in all subjects!

Members, please
log in to
download this
worksheet.

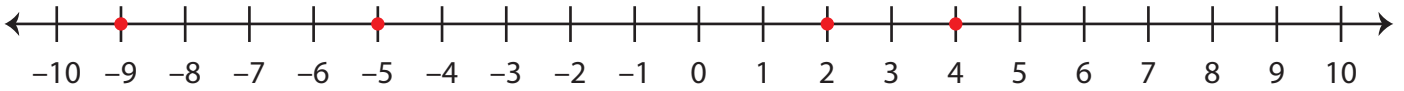
Not a member?
Please sign up to
gain complete
access.

www.mathworksheets4kids.com

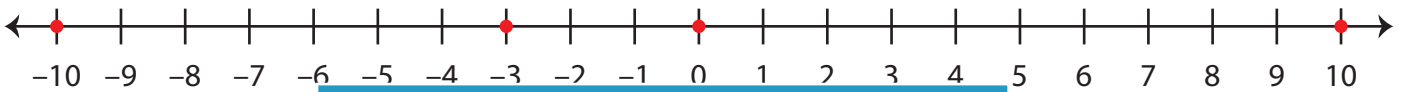
Ordering Integers

A) Mark the integers on the number line and order them from the least to the greatest.

1) -9, 4, -5, 2

**-9, -5, 2, 4**

2) 10, 0, -3, -10

**-10, -3, 0, 10**

3) -7, 6, -8, 1

**-8, -7, 1, 6**

B) Mark the integers on the number line and order them from the least to the greatest.

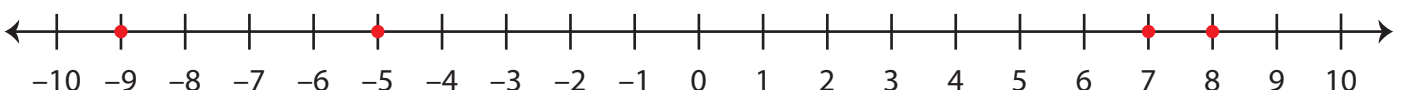
1) 3, -6, -4, 5

**5, 3, -4, -6**

2) -2, -1, 9, -7

**9, -1, -2, -7**

3) -5, 7, 8, -9

**8, 7, -5, -9****PREVIEW**

Gain complete access to the largest collection of worksheets in all subjects!

Members, please log in to download this worksheet.

Not a member? Please sign up to gain complete access.

www.mathworksheets4kids.com