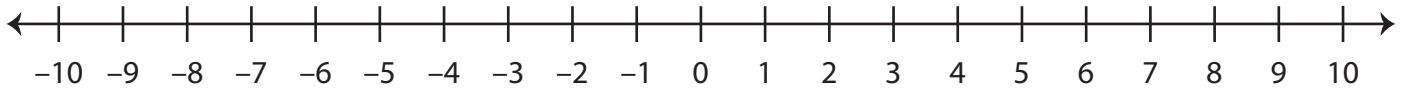


Ordering Integers

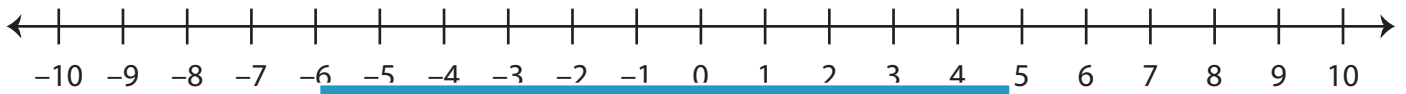
Sheet 2

A) Mark the integers on the number line and order them from the least to the greatest.

1) 1, -7, 9, -3



2) -2, 6, -8, 4



3) 5, 2, 10, -1



B) Mark the integers on the number line and order them from the least to the greatest.

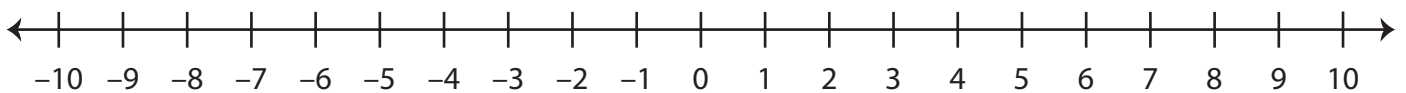
1) -9, -6, 8, -2



2) 5, -4, 3, 7



3) 0, -10, -8, 4



PREVIEW

Gain complete access to the largest
collection of worksheets in all subjects!

Members, please
log in to
download this
worksheet.

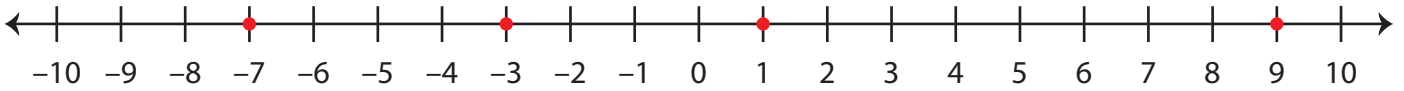
Not a member?
Please sign up to
gain complete
access.

www.mathworksheets4kids.com

Ordering Integers

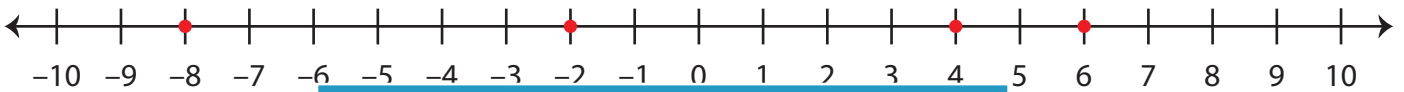
A) Mark the integers on the number line and order them from the least to the greatest.

1) 1, -7, 9, -3



-7, -3, 1, 9

2) -2, 6, -8, 4



-8, -2, 4, 6

3) 5, 2, 10, -1



-1, 2, 5, 10

B) Mark the integers on the number line and order them from the least to the greatest.

1) -9, -6, 8, -2



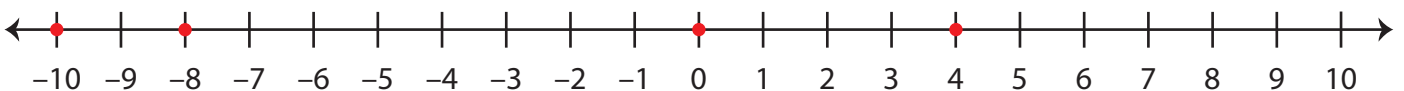
8, -2, -6, -9

2) 5, -4, 3, 7



7, 5, 3, -4

3) 0, -10, -8, 4



4, 0, -8, -10

PREVIEW

Gain complete access to the largest collection of worksheets in all subjects!

Members, please log in to download this worksheet.

Not a member? Please sign up to gain complete access.

www.mathworksheets4kids.com