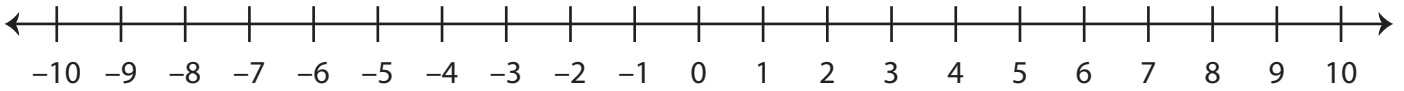


Ordering Integers

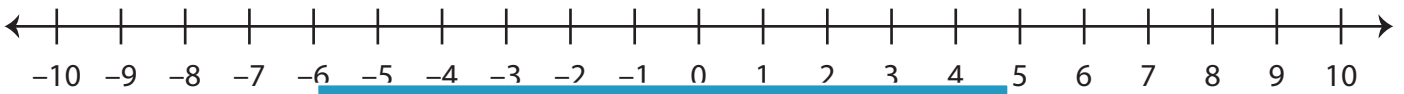
Sheet 3

A) Mark the integers on the number line and order them from the least to the greatest.

1) 6, 0, -10, 8



2) 1, -4, 7, -2



3) 4, -3, -5, -9



B) Mark the integers on the number line and order them from the least to the greatest.

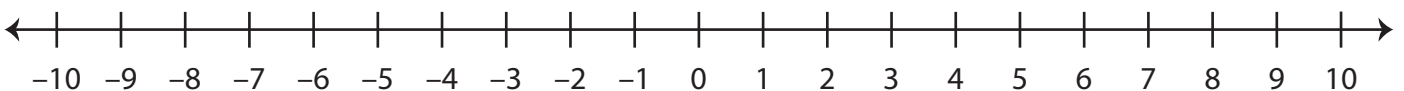
1) -8, 10, 3, -1



2) 9, -6, 0, -10



3) 5, -7, -9, 2



PREVIEW

Gain complete access to the largest
collection of worksheets in all subjects!

Members, please
log in to
download this
worksheet.

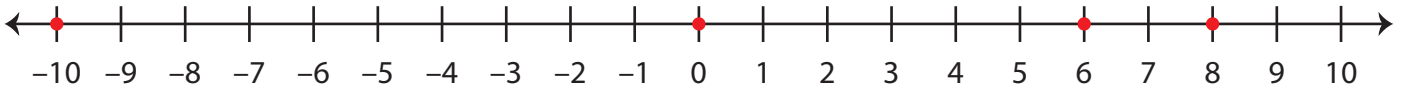
Not a member?
Please sign up to
gain complete
access.

www.mathworksheets4kids.com

Ordering Integers

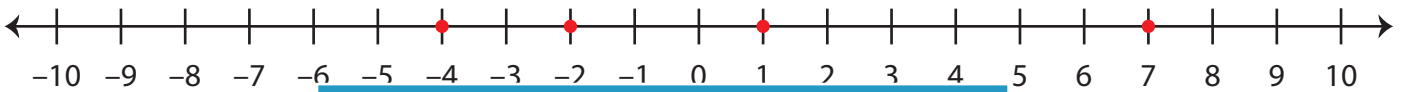
A) Mark the integers on the number line and order them from the least to the greatest.

1) 6, 0, -10, 8



-10, 0, 6, 8

2) 1, -4, 7, -2



-4, -2, 1, 7

3) 4, -3, -5, -9



-9, -5, -3, 4

B) Mark the integers on the number line and order them from the least to the greatest.

1) -8, 10, 3, -1



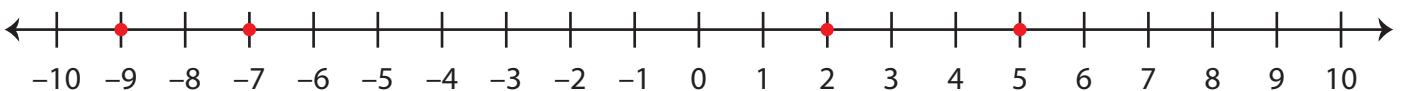
10, 3, -1, -8

2) 9, -6, 0, -10



9, 0, -6, -10

3) 5, -7, -9, 2



5, 2, -7, -9

PREVIEW

Gain complete access to the largest collection of worksheets in all subjects!

Members, please log in to download this worksheet.

Not a member? Please sign up to gain complete access.

www.mathworksheets4kids.com