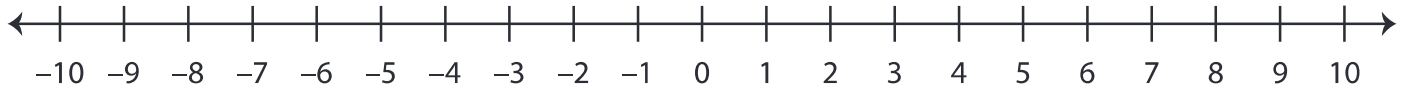


Number Line - Integers

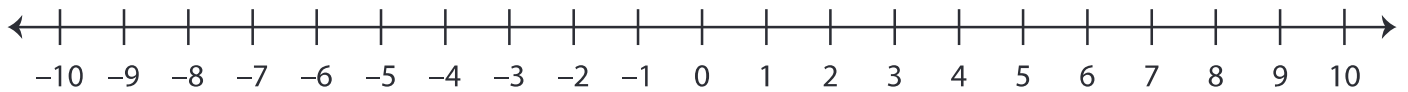
ES1

A) Mark the integers on the number line.

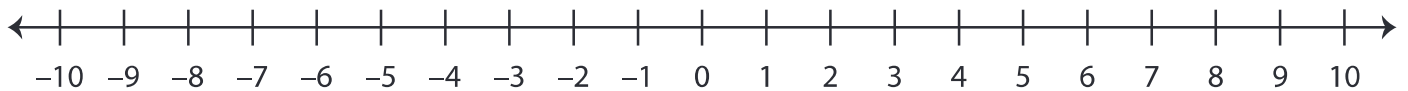
1) a) -2 b) 7 c) -5 d) 1



2) a) 9 b) -4 c) 3 d) -8



B) Answer the questions using the number line below.



1) 2 units to the left of 3 is _____

2) 6 units to the right of -1 is _____

3) 4 units to the left of -4 is _____

4) 3 units to the right of 7 is _____

5) 1 unit to the left of 10 is _____

6) 5 units to the right of -6 is _____

7) 8 units to the left of 5 is _____