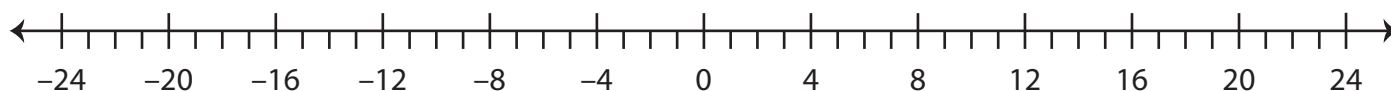


Number Line - Integers

MS3

A) Mark the integers on the number line.

- 1) a) 2 b) 20 c) -5 d) -11



- 2) a) 25 b) -19 c) 31 d) -13



B) Answer the question



- 1) 3 units to the r

- 2) 11 units to the

- 3) 1 unit to the le

- 4) 19 units to the

- 5) 10 units to the right of -18 is _____

- 6) 7 units to the right of -6 is _____

- 7) 21 units to the left of 17 is _____

PREVIEW

Gain complete access to the largest
collection of worksheets in all subjects!

Members, please
log in to
download this
worksheet.

Not a member?
Please sign up to
gain complete
access.

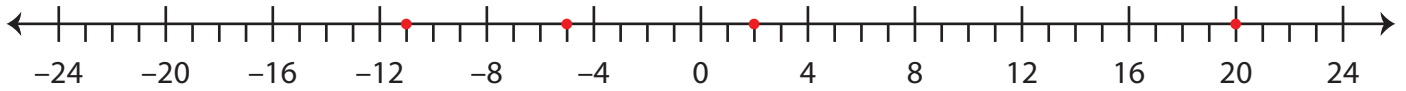
www.mathworksheets4kids.com

Answer key**Number Line - Integers**

MS3

A) Mark the integers on the number line.

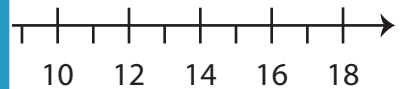
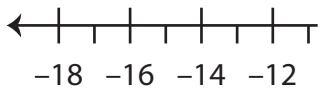
- 1) a) 2 b) 20 c) -5 d) -11



- 2) a) 25 b) -19 c) 31 d) -13



B) Answer the question



- 1) 3 units to the r

- 2) 11 units to the

- 3) 1 unit to the le

- 4) 19 units to the

- 5) 10 units to the right of -18 is
- 8

- 6) 7 units to the right of -6 is
- 1

- 7) 21 units to the left of 17 is
- 4

PREVIEWGain complete access to the largest
collection of worksheets in all subjects!Members, please
log in to
download this
worksheet.Not a member?
Please sign up to
gain complete
access.www.mathworksheets4kids.com