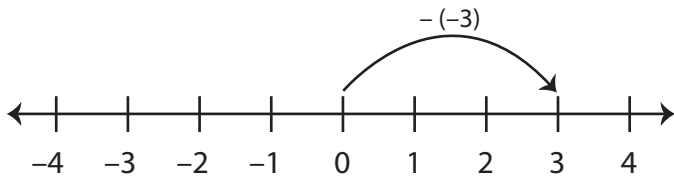
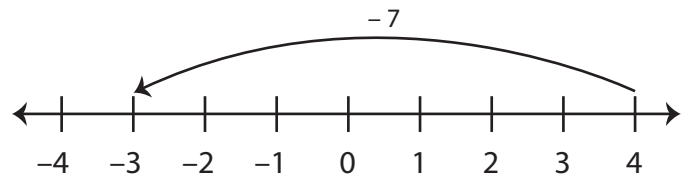


Number Line - Subtracting Integers

Example 1: $0 - (-3) = 3$

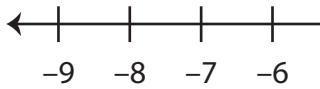


Example 2: $4 - 7 = -3$

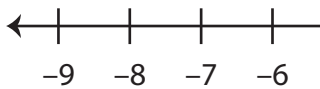


Use the number line to find the difference.

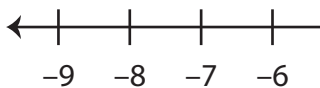
1) $-9 - (-12) =$ _____



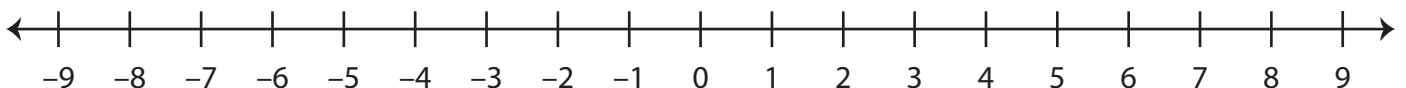
2) $6 - 8 =$ _____



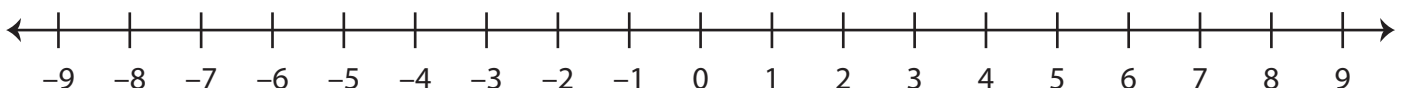
3) $4 - (-5) =$ _____



4) $-3 - 1 =$ _____



5) $2 - (-4) =$ _____



PREVIEW

Gain complete access to the largest
collection of worksheets in all subjects!

Members, please
log in to
download this
worksheet.

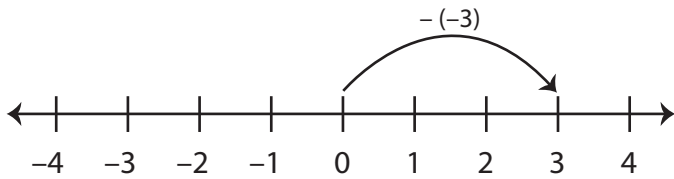
Not a member?
Please sign up to
gain complete
access.

www.mathworksheets4kids.com

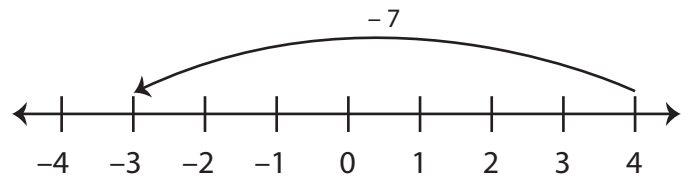
Number Line - Subtracting Integers

Sheet 2

Example 1: $0 - (-3) = 3$




Example 2: $4 - 7 = -3$



Use the number line to find the difference.

1) $-9 - (-12) = \underline{\quad 3 \quad}$



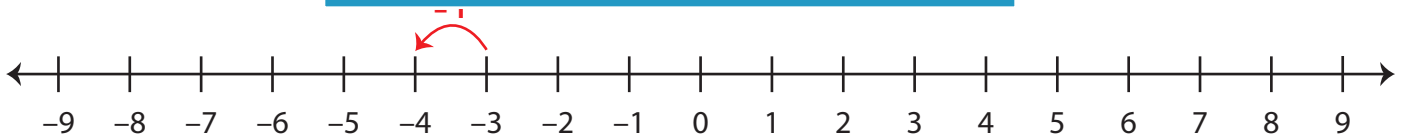
2) $6 - 8 = \underline{\quad -2 \quad}$



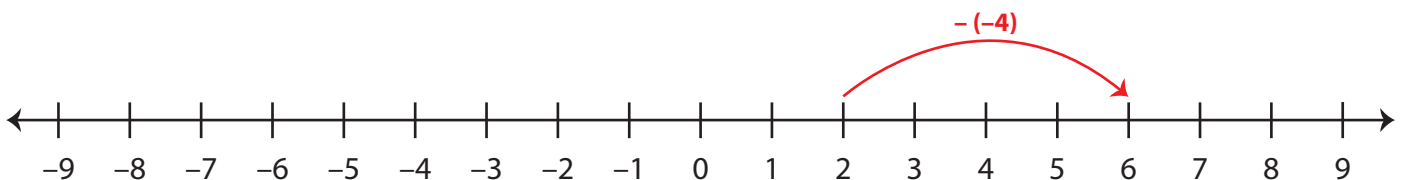
3) $4 - (-5) = \underline{\quad 9 \quad}$



4) $-3 - 1 = \underline{\quad -4 \quad}$



5) $2 - (-4) = \underline{\quad 6 \quad}$



PREVIEW

Gain complete access to the largest collection of worksheets in all subjects!

Members, please log in to download this worksheet.

Not a member? Please sign up to gain complete access.

www.mathworksheets4kids.com