

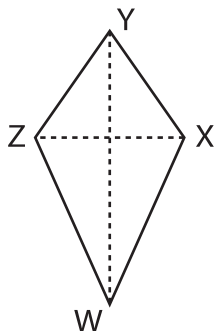
Name : _____

Area of a Kite

T1L1S3

Find the area of each kite.

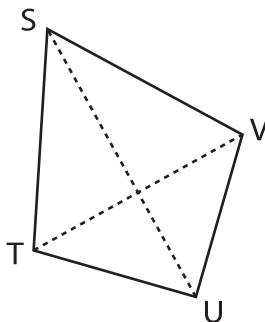
1)



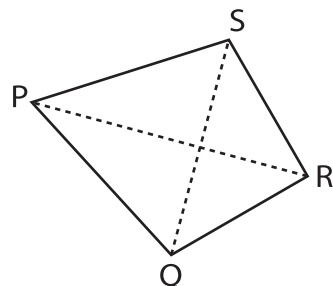
$XZ = 15$ ft, $WY = 19$ ft

Area = _____

2)



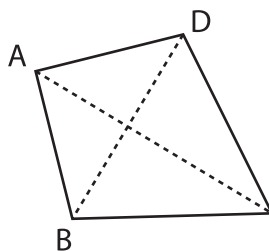
3)



$PR = 18$ yd, $QS = 12$ yd

Area = _____

4)



$AC = 14$ yd, $BD = 3$ yd

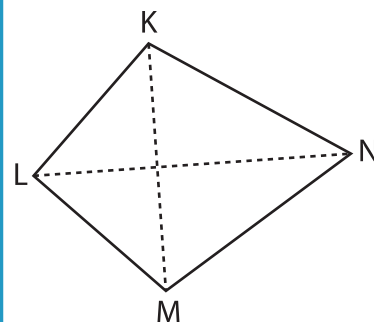
Area = _____

PREVIEW
Gain complete access to the largest collection of worksheets in all subjects!

Members, please log in to download this worksheet.

Not a member? Please sign up to gain complete access.

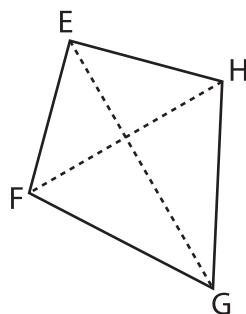
www.mathworksheets4kids.com



$KM = 10$ in, $LN = 13$ in

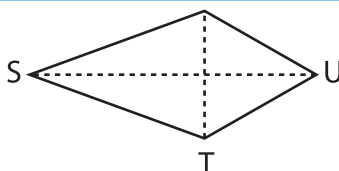
Area = _____

7)



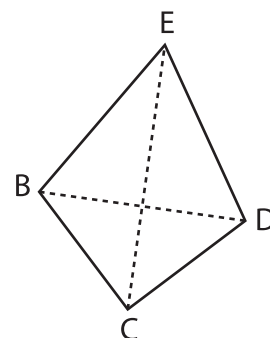
$EG = 8$ in, $FH = 6$ in

Area = _____



$RT = 2$ yd, $SU = 5$ yd

Area = _____



$BD = 7$ ft, $CE = 19$ ft

Area = _____