

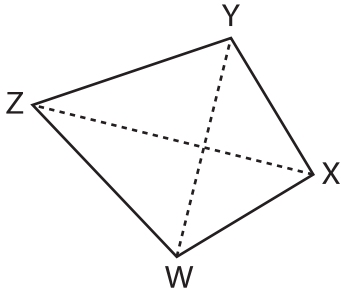
Name : _____

Area of a Kite

T1L2S3

Find the area of each kite.

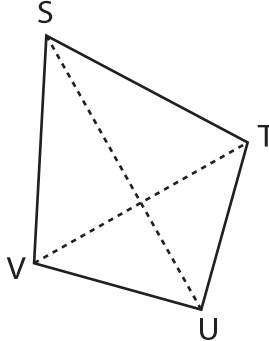
1)



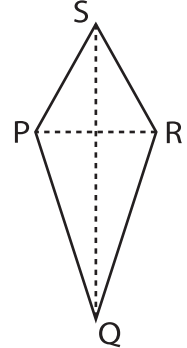
$XZ = 56$ ft, $WY = 48$ ft

Area = _____

2)



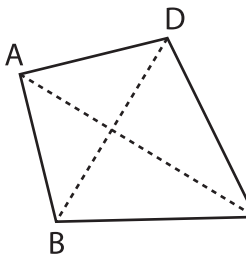
3)



$PR = 72$ yd, $QS = 81$ yd

Area = _____

4)



$AC = 23$ yd, $BD = 14$ yd

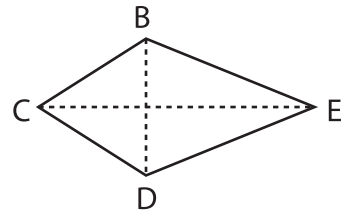
Area = _____

PREVIEW
Gain complete access to the largest collection of worksheets in all subjects!

Members, please log in to download this worksheet.

Not a member? Please sign up to gain complete access.

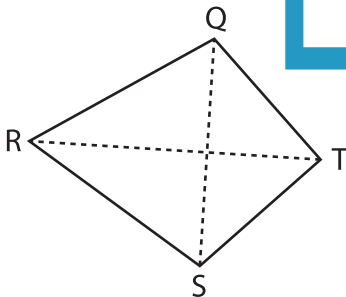
www.mathworksheets4kids.com



$BD = 58$ in, $CE = 64$ in

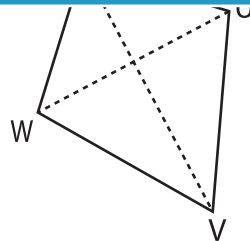
Area = _____

7)



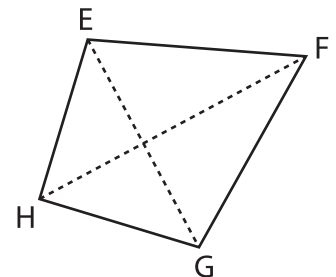
$QS = 61$ in, $RT = 70$ in

Area = _____



$TV = 43$ yd, $UW = 39$ yd

Area = _____



$EG = 10$ ft, $FH = 16$ ft

Area = _____