

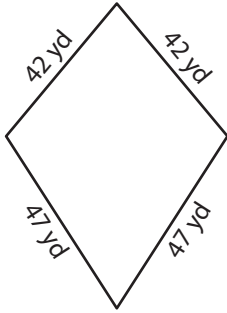
Name : \_\_\_\_\_

# Kite

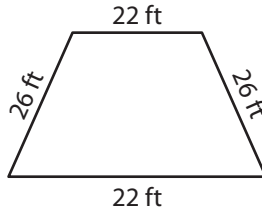
Sheet 1

A) State whether each quadrilateral is a kite.

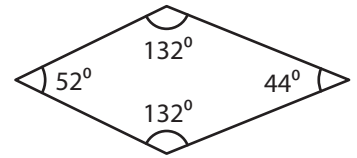
1)



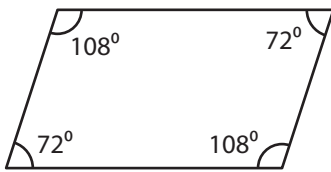
2)



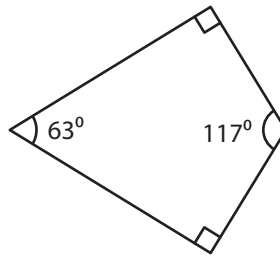
3)



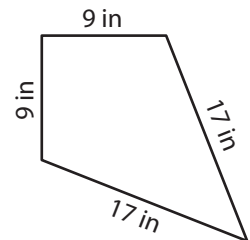
4)



5)

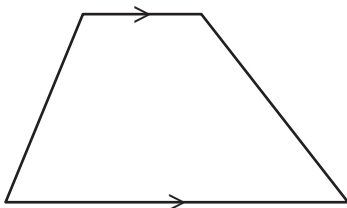


6)

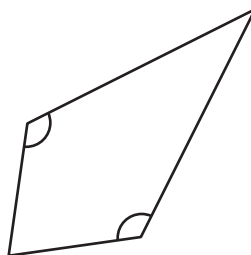


B) State whether each quadrilateral is a kite.

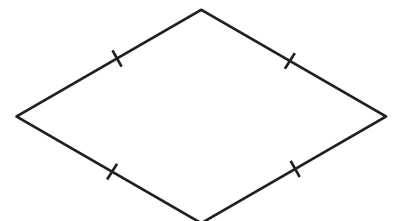
7)



8)



9)



Name : \_\_\_\_\_

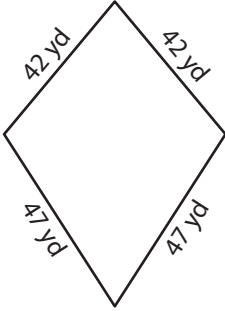
## Answer key

# Kite

Sheet 1

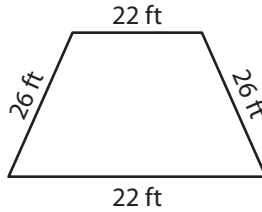
A) State whether each quadrilateral is a kite.

1)



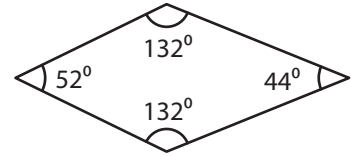
**kite**

2)



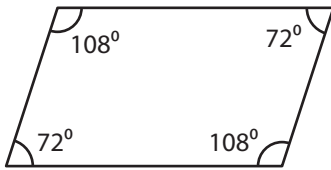
**not a kite**

3)



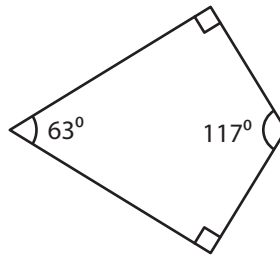
**kite**

4)



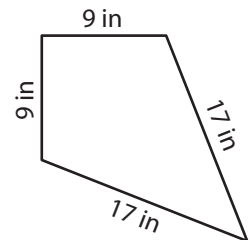
**not a kite**

5)



**kite**

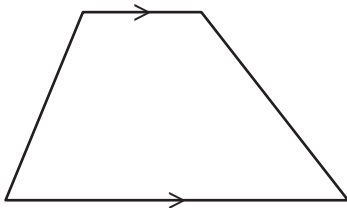
6)



**kite**

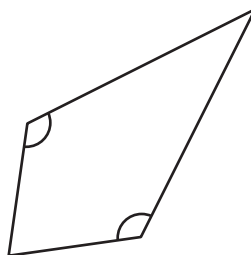
B) State whether each quadrilateral is a kite.

7)



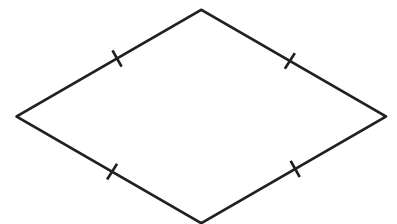
**not a kite**

8)



**kite**

9)



**not a kite**