

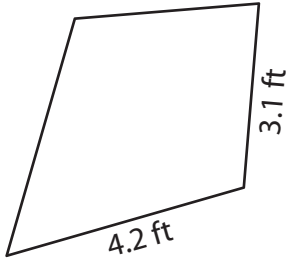
Name : _____

Perimeter of a Kite

Sheet 2

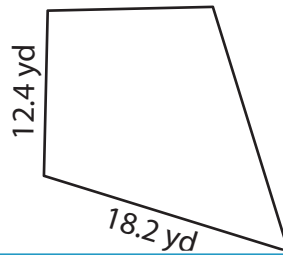
Find the perimeter of each kite.

1)

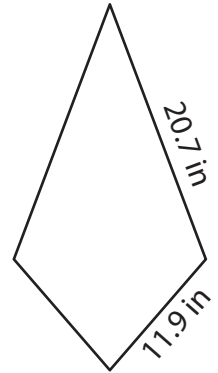


Perimeter = _____

2)

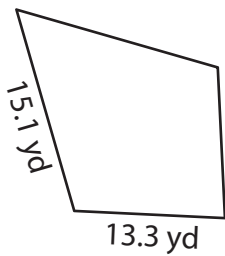


3)



Perimeter = _____

4)



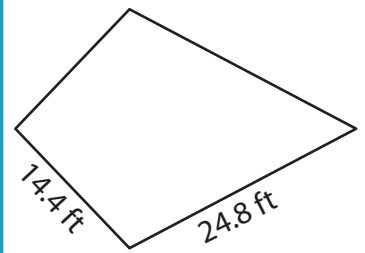
Perimeter = _____

PREVIEW
Gain complete access to the largest collection of worksheets in all subjects!

Members, please log in to download this worksheet.

Not a member? Please sign up to gain complete access.

www.mathworksheets4kids.com



Perimeter = _____

7) Determine the perimeter

of a kite with sides of 12.5 inches and 10.5 inches.

8) If the non-congruent sides of a kite measure 9.3 feet and 14.6 feet, find the perimeter of the kite.

Name : _____

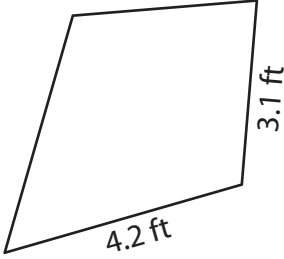
Answer key

Sheet 2

Perimeter of a Kite

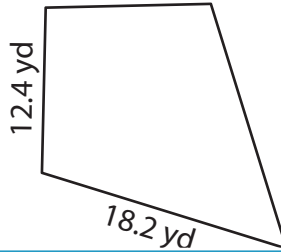
Find the perimeter of each kite.

1)

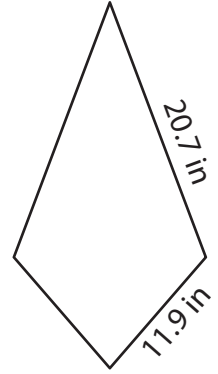


Perimeter = 14.6 ft

2)

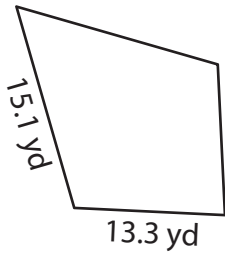


3)



Perimeter = 65.2 in

4)



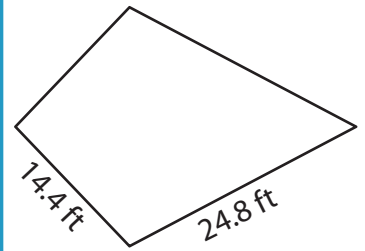
Perimeter = 56.8 yd

Gain complete access to the largest collection of worksheets in all subjects!

Members, please log in to download this worksheet.

Not a member? Please sign up to gain complete access.

www.mathworksheets4kids.com



Perimeter = 78.4 ft

7) Determine the perimeter

es and 10.5 inches.

54.4 inches

8) If the non-congruent sides of a kite measure 9.3 feet and 14.6 feet, find the perimeter of the kite.

47.8 feet