

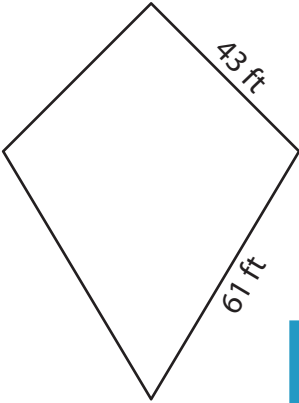
Name : \_\_\_\_\_

## Perimeter of a Kite

L2S4

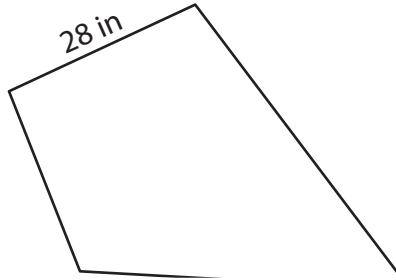
Find the perimeter of each kite.

1)

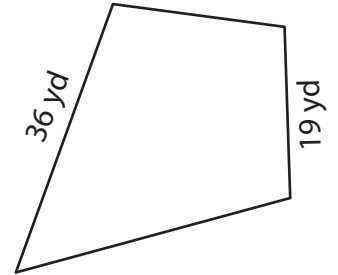


Perimeter = \_\_\_\_\_

2)

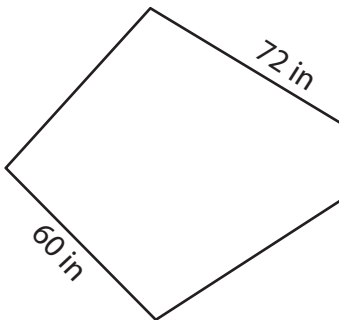


3)



Perimeter = \_\_\_\_\_

4)




Perimeter = \_\_\_\_\_

**PREVIEW**  
Gain complete access to the largest collection of worksheets in all subjects!

Members, please log in to download this worksheet.

Not a member? Please sign up to gain complete access.

[www.mathworksheets4kids.com](http://www.mathworksheets4kids.com)



Perimeter = \_\_\_\_\_

7) If the non-congruent sides are 12 ft and 18 ft,

what is the perimeter of the kite.

\_\_\_\_\_

8) Find the perimeter of the kite, if the sides of the kite measure 16 yards and 38 yards.

\_\_\_\_\_

Name : \_\_\_\_\_

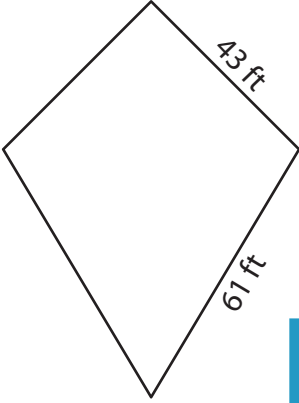
## Answer key

L2S4

### Perimeter of a Kite

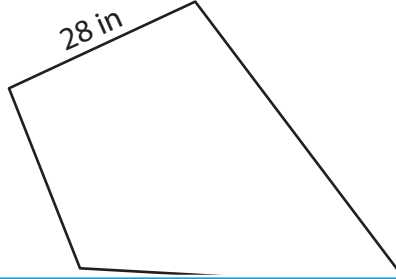
Find the perimeter of each kite.

1)

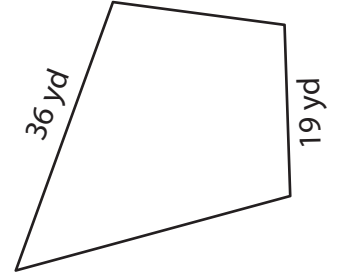


Perimeter = 208 ft

2)

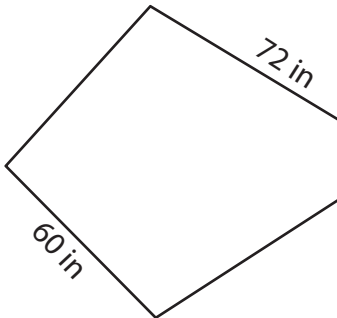


3)



Perimeter = 110 yd

4)




Perimeter = 264 in

**PREVIEW**  
Gain complete access to the largest collection of worksheets in all subjects!

Members, please log in to download this worksheet.

Not a member? Please sign up to gain complete access.

[www.mathworksheets4kids.com](http://www.mathworksheets4kids.com)



Perimeter = 192 ft

7) If the non-congruent sides are 14 feet and 20 feet,

what is the perimeter of the kite.

114 feet

8) Find the perimeter of the kite, if the sides of the kite measure 16 yards and 38 yards.

108 yards