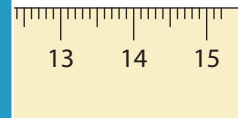
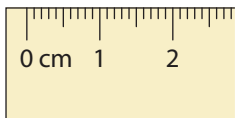
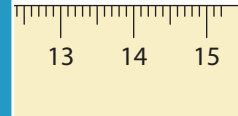
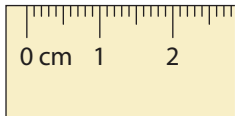



Measuring Length

Read the measurement of each item and answer the questions that follow.



PREVIEW

Gain complete access to the largest
collection of worksheets in all subjects!

Members, please
log in to
download this
worksheet.

Not a member?
Please sign up to
gain complete
access.

www.mathworksheets4kids.com

- 1) Measure and write the length of the hammer. _____
- 2) Measure and write the length of the nail. _____
- 3) By how many centimeters is the hammer longer than the screwdriver? _____
- 4) If the hammer is replaced with one that is 4 cm shorter, what is the length of the shorter hammer? _____
- 5) By how many centimeters is the hammer longer than the nail? _____