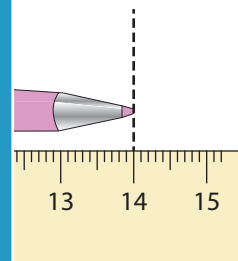
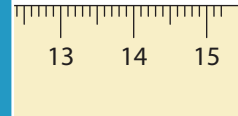
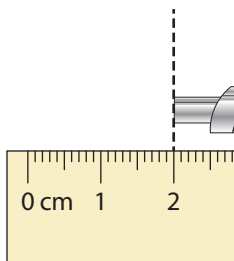
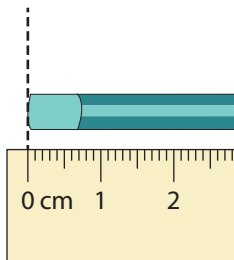
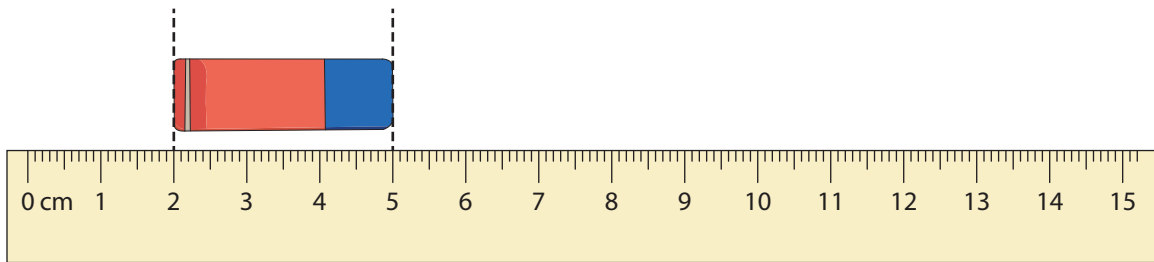


Measuring Length

Read the measurement of each item and answer the questions that follow.



PREVIEW

Gain complete access to the largest
collection of worksheets in all subjects!

Members, please
log in to
download this
worksheet.

Not a member?
Please sign up to
gain complete
access.

www.mathworksheets4kids.com

- 1) Measure and write the length of the object. _____
- 2) By how many centimeters is the pencil longer than the pen? _____
- 3) If the eraser is replaced with a shorter one, what is the length of the shorter eraser? _____
- 4) By how many centimeters is the pen longer than the eraser? _____
- 5) If the pencil is replaced with one that is 3 cm longer, what is the length of the longer pencil? _____