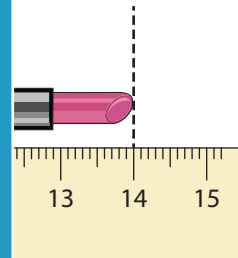
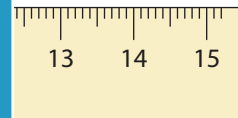
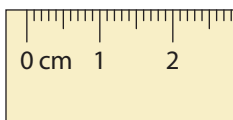
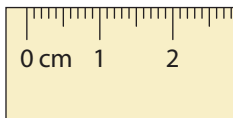
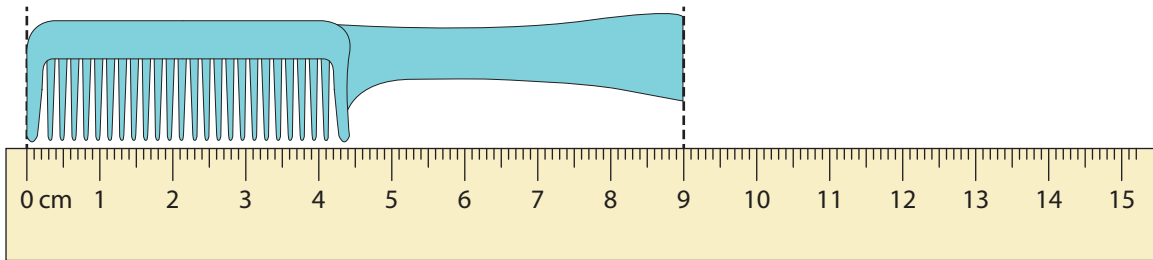


Measuring Length

Read the measurement of each item and answer the questions that follow.



PREVIEW

Gain complete access to the largest
collection of worksheets in all subjects!

Members, please
log in to
download this
worksheet.

Not a member?
Please sign up to
gain complete
access.

www.mathworksheets4kids.com

- 1) Measure and write the length of the comb. _____
- 2) Measure and write the length of the lipstick. _____
- 3) By how many centimeters is the comb longer than the lipstick? _____
- 4) By how many centimeters is the lipstick shorter than the comb? _____
- 5) If the comb is replaced with one that is 5 cm longer, what is the length of the longer comb? _____