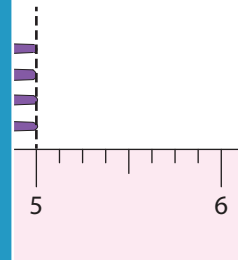
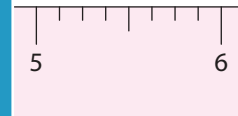
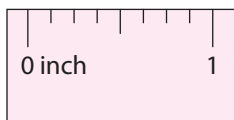
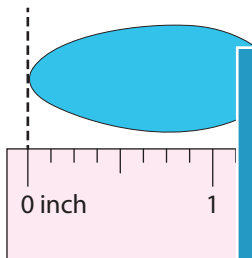
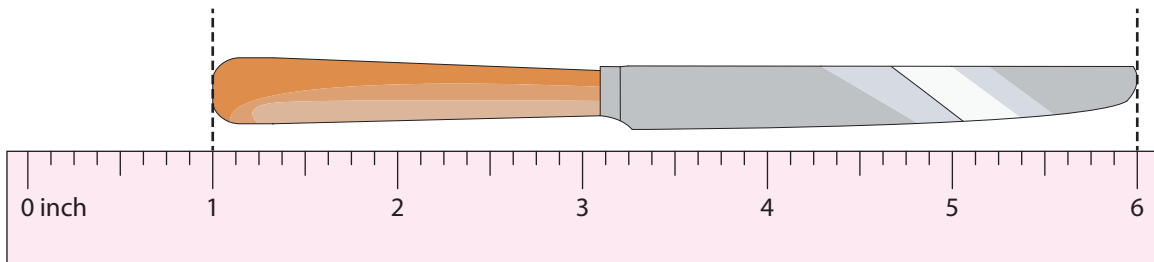


Measuring Length

Read the measurement of each item and answer the questions that follow.



PREVIEW

Gain complete access to the largest
collection of worksheets in all subjects!

Members, please
log in to
download this
worksheet.

Not a member?
Please sign up to
gain complete
access.

www.mathworksheets4kids.com

- 1) Measure and write the length of the knife. _____
- 2) Measure and write the length of the spoon. _____
- 3) By how many inches is the spoon longer than the fork? _____
- 4) If the fork is replaced with one that is 3 inches longer, what is the length of the longer fork? _____
- 5) By how many inches is the knife longer than the fork? _____