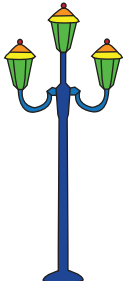





Estimating Length

A) Determine which unit of the length is the most appropriate to measure each object.

1)  ☐ cm
☐ m

2)  ☐ cm
☐ m

3) 

 ☐ cm
☐ m

B) Sort the objects in

Centimeter

measure them.

rope	wall
bus	glue stick
pencil	

PREVIEW

Gain complete access to the largest collection of worksheets in all subjects!

Members, please log in to download this worksheet.

Not a member? Please sign up to gain complete access.

www.mathworksheets4kids.com

C) Complete each sentence with an appropriate unit of measurement.

- Noah makes a bow tie with a ribbon measuring 50 _____ (m/cm).
- Oliver bought a rope measuring 8 _____ (m/cm) for a tug of war game.
- Elijah cuts a piece of twine measuring 15 _____ (m/cm) to wrap around a tomato plant.