




**Line Segment - Ruler**

Centimeter: S1


Measure the length of each line segment.

1)   cm

2)   cm

3)   cm

4)   cm

5)   cm

Draw a line segment for each measure.

6) 4 cm

7) 9 cm

8) 6 cm

9) 13 cm


10) 7 cm


**Answer Key****Line Segment - Ruler**


Centimeter: 51

Note : Answers may vary depending on the printer settings.


Measure the length of each line segment.

1)  8 cm

2)  10 cm

3)  14 cm

4)  5 cm

5)  12 cm

Draw a line segment for each measure.

6) 4 cm 

7) 9 cm 

8) 6 cm 

9) 13 cm 

10) 7 cm 