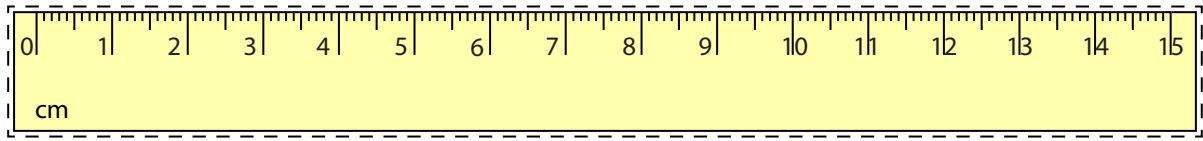




Line Segment - Ruler


Centimeter: S1




Cut out the ruler. Measure the length of each line segment.

1)  cm

2)  cm

3)  cm

4)  cm

5)  cm

Draw a line segment for each measure.

6) 4 cm

7) 9 cm

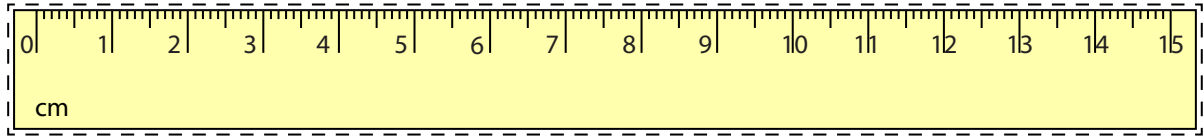
8) 6 cm

9) 13 cm






10) 7 cm

Answer Key**Line Segment - Ruler**

Centimeter: S1



Cut out the ruler. Measure the length of each line segment.

1)  **8** cm2)  **10** cm3)  **14** cm4)  **5** cm5)  **12** cm

Draw a line segment for each measure.

6) 4 cm 7) 9 cm 8) 6 cm 9) 13 cm 10) 7 cm 